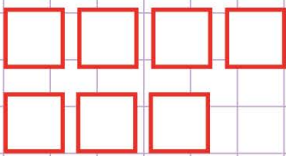


Name: Class:

How to count odd and even numbers of shapes

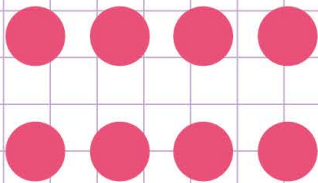
Determine if the number of the given shapes below is even or odd.

1.



Even Odd

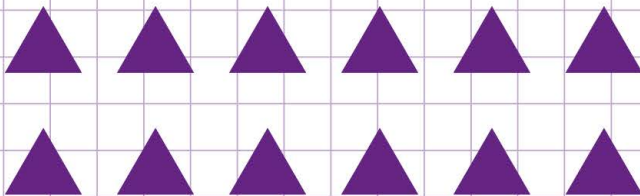
2.



Even Odd

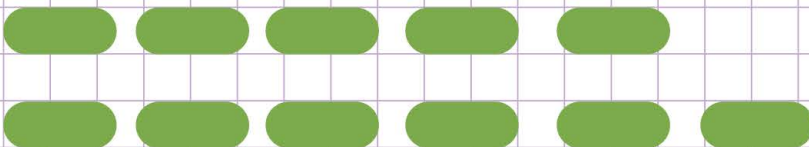


3.



Even Odd

4.



Even Odd

5.



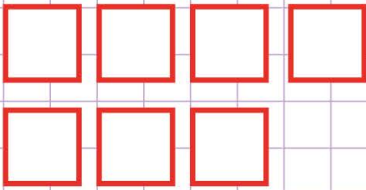
Even Odd

Name: Class:

How to count odd and even numbers of shapes

Determine if the number of the given shapes below is even or odd.

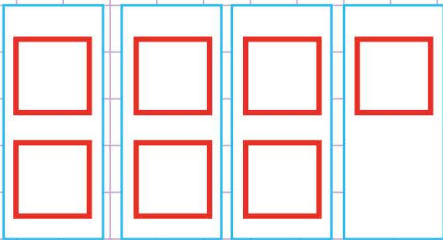
1.



Even

Odd

Check if all the squares can be matched in pairs as shown below.



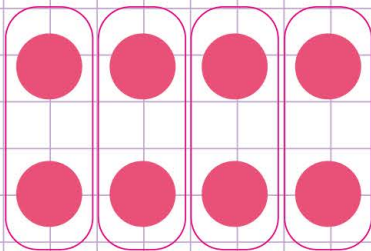
Pair Pair Pair No pair

You see that, not all the squares are matched in pairs.

So, the number of squares is odd.



2.

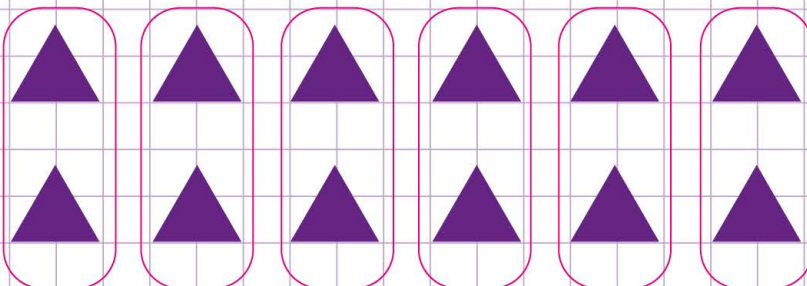


Pair Pair Pair Pair

Even

Odd

3.



Pair Pair Pair Pair Pair Pair

Even

Odd