


Name: Class:

Writing addition sentence to describe models sums up to 10 only

Match each model to its correct addition sentence.



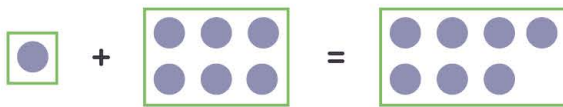
$5 + 5 = 10$



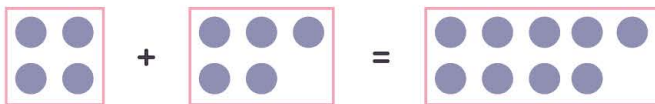
$1 + 6 = 7$




$1 + 2 = 3$



$3 + 3 = 6$



$4 + 5 = 9$



$2 + 6 = 8$

Name: Class:

Writing addition sentence to describe models sums up to 10 only

Match each model to its correct addition sentence.

$$1 + 2 = 3$$

$$2 + 6 = 8$$

$$5 + 5 = 10$$

$$1 + 6 = 7$$

$$4 + 5 = 9$$

$$3 + 3 = 6$$

$$5 + 5 = 10$$

$$1 + 6 = 7$$

$$1 + 2 = 3$$

$$3 + 3 = 6$$

$$4 + 5 = 9$$

$$2 + 6 = 8$$