


Name: Class:

Subtraction with pictures up to 20


Counts all the objects. Cross out the objects in each group to show how many you are subtracting. Then write the answer.

1.




$$\begin{array}{r} 12 \\ - 7 \\ \hline \end{array}$$

4.




$$\begin{array}{r} 8 \\ - 3 \\ \hline \end{array}$$

2.




$$\begin{array}{r} 20 \\ - 9 \\ \hline \end{array}$$

5.



$$\begin{array}{r} 14 \\ - 5 \\ \hline \end{array}$$

3.



$$\begin{array}{r} 11 \\ - 2 \\ \hline \end{array}$$

6.




$$\begin{array}{r} 18 \\ - 7 \\ \hline \end{array}$$

Name: Class:

Subtraction with pictures up to 20

Counts all the objects. Cross out the objects in each group to show how many you are subtracting. Then write the answer.

1.



$$\begin{array}{r} 12 \\ - 7 \\ \hline 5 \end{array}$$

4.




$$\begin{array}{r} 8 \\ - 3 \\ \hline 5 \end{array}$$

2.



$$\begin{array}{r} 20 \\ - 9 \\ \hline 11 \end{array}$$

5.



$$\begin{array}{r} 14 \\ - 5 \\ \hline 9 \end{array}$$

3.



$$\begin{array}{r} 11 \\ - 2 \\ \hline 9 \end{array}$$

6.



$$\begin{array}{r} 18 \\ - 7 \\ \hline 11 \end{array}$$