

Name: ..... Class: .....

How to interpret pictographs






1. Luella works at a local restaurant, last week, she recorded the number of customers that came to the restaurant in a pictograph. Use the data in the pictograph to answer the questions below.

N° of customers that came to the restaurant last week	
Monday	
Tuesday	
Wednesday	
Thursday	
Friday	
Saturday	
Sunday	

 = 10 customers

- How many customers came to the restaurant on Sunday ?
- How many more customers came to the restaurant on Saturday than on Tuesday?
- How many customers came to the restaurant last week in all?

2. Yesterday, Mustafa and his friends went to the orchard to collect some fruits. Look at the pictograph of how many fruits each person collected and answer the following questions.

N° of fruits each person picked yesterday	
Mustafa	
Seven	
Yadiel	
Abdul	
Zyon	

- How many more fruits did Zyon pick than Seven?
- In all, how many fruits did they pick?

Each  = 2 fruits

Each  = 1 fruit

Name: ..... Class: .....

How to interpret pictographs






1. Luella works at a local restaurant, last week, she recorded the number of customers that came to the restaurant in a pictograph. Use the data in the pictograph to answer the questions below.

N° of customers that came to the restaurant last week	
Monday	
Tuesday	
Wednesday	
Thursday	
Friday	
Saturday	
Sunday	

 = 10 customers

- a) How many customers came to the restaurant on Sunday ?  
**150 Customers**
- b) How many more customers came to the restaurant on Saturday than on Tuesday?  
**100 Customers**
- c) How many customers came to the restaurant last week in all?  
**600 Customers**

2. Yesterday, Mustafa and his friends went to the orchard to collect some fruits. Look at the pictograph of how many fruits each person collected and answer the following questions.

N° of fruits each person picked yesterday	
Mustafa	
Seven	
Yadiel	
Abdul	
Zyon	

- a) How many more fruits did Zyon pick than Seven?  
**1 more fruit than Seven**
- b) In all, how many fruits did they pick?  
**22 fruits**

Each  = 2 fruits

Each  = 1 fruit