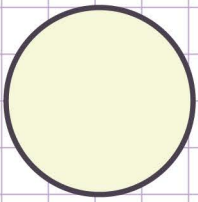


Name: Class:


Identifying two dimensional shapes

Identify each 2-dimensional shape and write the name.

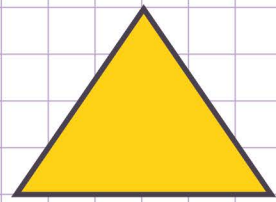
a.



b.



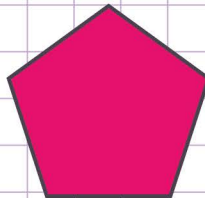
c.



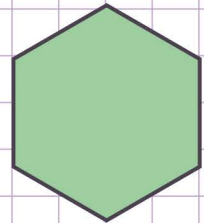
d.



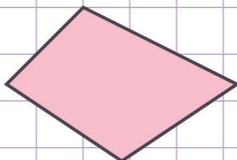
e.



f.



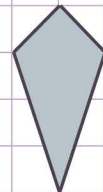
g.



h.



i.

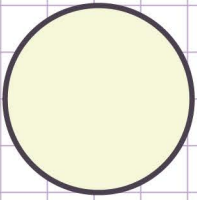


Name: Class:

Identifying two dimensional shapes


Identify each 2-dimensional shape and write the name.

a.



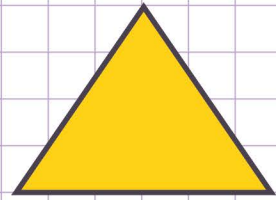
A Circle

b.



A Square

c.



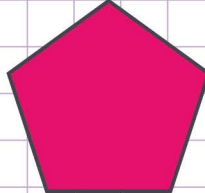
A Triangle

d.



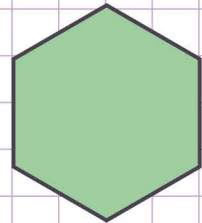
A rectangle

e.



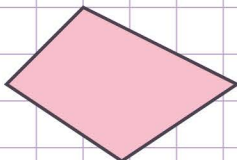
A Pentagon

f.



A Hexagon

g.



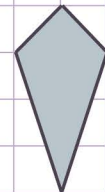
A parallelogram

h.



A trapezoid

i.



A kite