

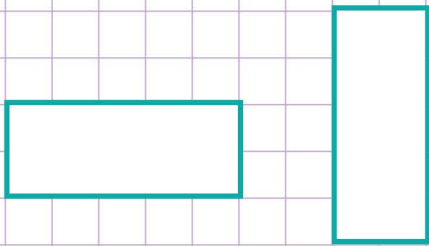
Name: Class:

How to identify congruent shapes

Note: Two shapes are congruent if they are of the same size and shape.

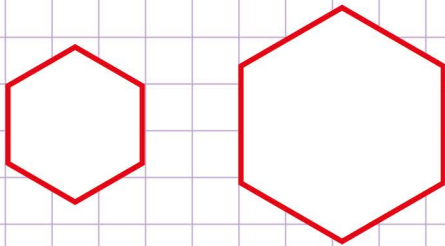
Tick the correct answer.

a.



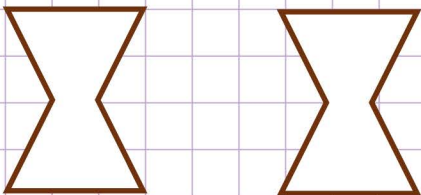
Congruent Not congruent

b.



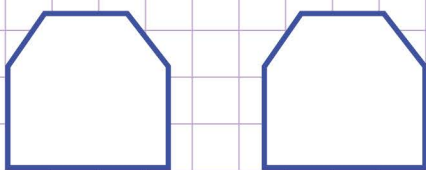
Congruent Not congruent

c.



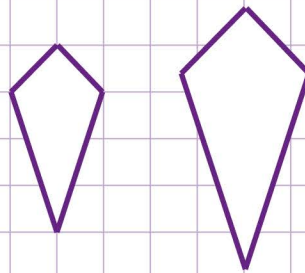
Congruent Not congruent

d.



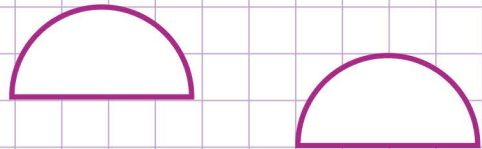
Congruent Not congruent

e.



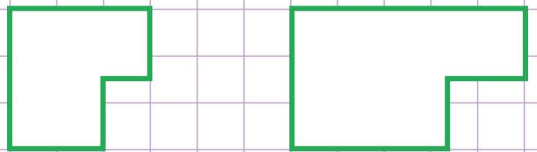
Congruent Not congruent

f.



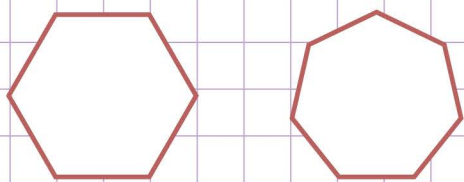
Congruent Not congruent

g.



Congruent Not congruent

h.



Congruent Not congruent

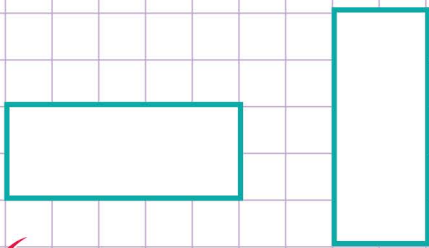
Name: Class:

How to identify congruent shapes

Note: Two shapes are congruent if they are of the same size and shape.

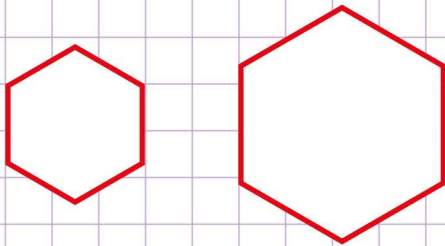
Tick the correct answer.

a.



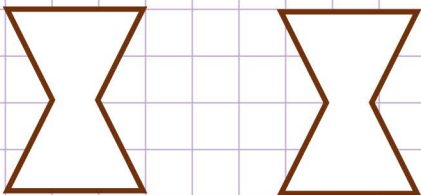
Congruent Not congruent

b.



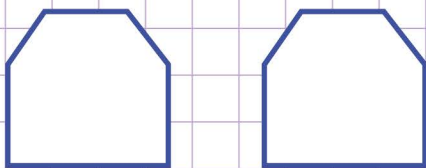
Congruent Not congruent

c.



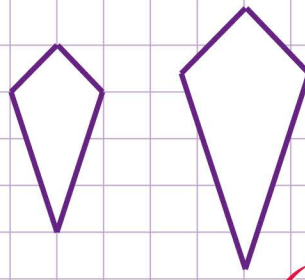
Congruent Not congruent

d.



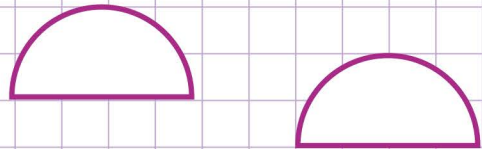
Congruent Not congruent

e.



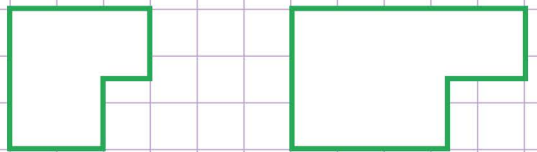
Congruent Not congruent

f.



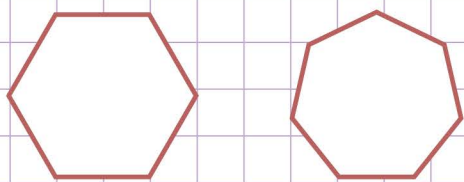
Congruent Not congruent

g.



Congruent Not congruent

h.



Congruent Not congruent