

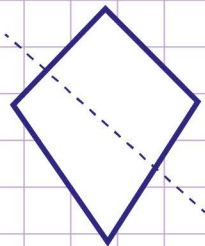
Name: Class:

Identify lines of symmetry

Note: A line of symmetry is a line that cuts a shape/object exactly in halves.

Is the dotted line on each shape/object a line of symmetry? Tick Yes or No.

a.



Yes

No


b.



Yes

No

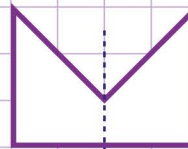
c.



Yes

No

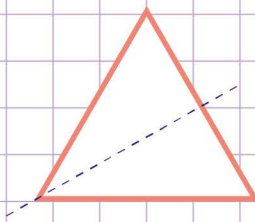
d.



Yes

No

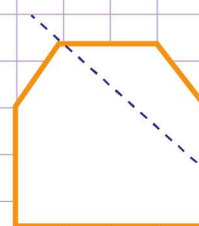
e.



Yes

No

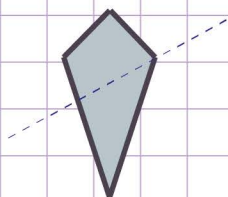
f.



Yes

No

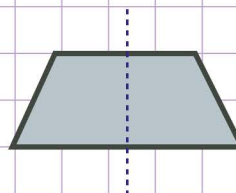
g.



Yes

No

h.



Yes

No

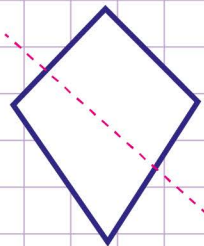
Name: Class:

Identify lines of symmetry

Note: A line of symmetry is a line that cuts a shape/object exactly in halves.

Is the dotted line on each shape/object a line of symmetry? Tick Yes or No.

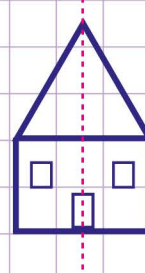
a.



Yes

No


b.



Yes

No

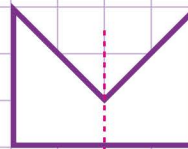
c.



Yes

No

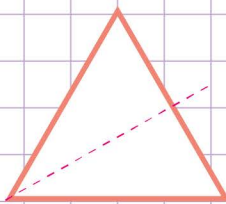
d.



Yes

No

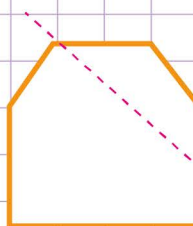
e.



Yes

No

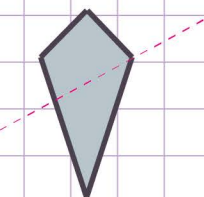
f.



Yes

No

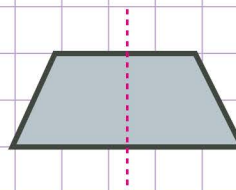
g.



Yes

No

h.



Yes

No