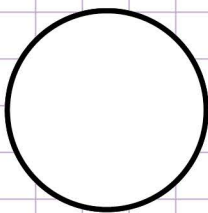

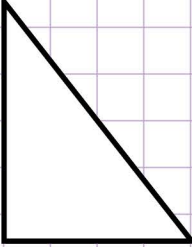
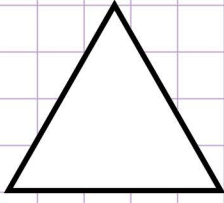
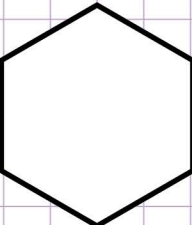

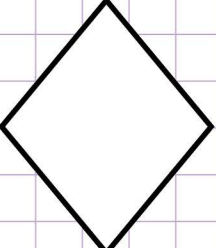



Name: ..... Class: .....

Different ways to make halves, thirds, and fourths

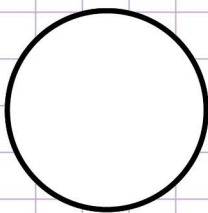

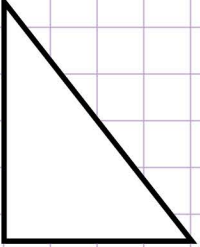
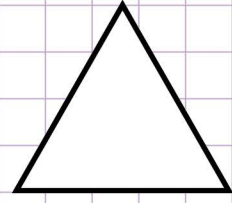
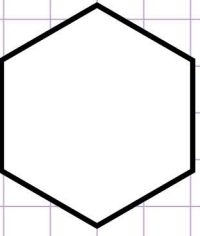

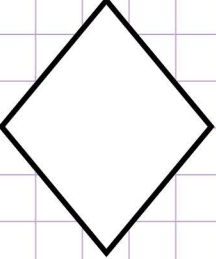

How many different ways are there to make the following shapes into halves, thirds and fourths.

<p><b>a.</b></p> 	<p>Halves: _____ way(s)            Thirds: _____ way(s)            Fourths: _____ way(s)</p>	<p><b>b.</b></p> 	<p>Halves: _____ way(s)            Thirds: _____ way(s)            Fourths: _____ way(s)</p>
<p><b>c.</b></p> 	<p>Halves: _____ way(s)            Thirds: _____ way(s)            Fourths: _____ way(s)</p>	<p><b>d.</b></p> 	<p>Halves: _____ way(s)            Thirds: _____ way(s)            Fourths: _____ way(s)</p>
<p><b>e.</b></p> 	<p>Halves: _____ way(s)            Thirds: _____ way(s)            Fourths: _____ way(s)</p>	<p><b>f.</b></p> 	<p>Halves: _____ way(s)            Thirds: _____ way(s)            Fourths: _____ way(s)</p>
<p><b>e.</b></p> 	<p>Halves: _____ way(s)            Thirds: _____ way(s)            Fourths: _____ way(s)</p>	<p><b>f.</b></p> 	<p>Halves: _____ way(s)            Thirds: _____ way(s)            Fourths: _____ way(s)</p>

Name: ..... Class: .....

Different ways to make halves, thirds, and fourths

How many different ways are there to make the following shapes into halves, thirds and fourths.

<p>a.</p> 	<p>Halves: <u>4</u> way(s)            Thirds: <u>1</u> way(s)            Fourths: <u>1</u> way(s)</p>	<p>b.</p> 	<p>Halves: <u>1</u> way(s)            Thirds: <u>1</u> way(s)            Fourths: <u>0</u> way(s)</p>
<p>c.</p> 	<p>Halves: <u>1</u> way(s)            Thirds: <u>0</u> way(s)            Fourths: <u>0</u> way(s)</p>	<p>d.</p> 	<p>Halves: <u>1</u> way(s)            Thirds: <u>3</u> way(s)            Fourths: <u>2</u> way(s)</p>
<p>e.</p> 	<p>Halves: <u>6</u> way(s)            Thirds: <u>1</u> way(s)            Fourths: <u>1</u> way(s)</p>	<p>f.</p> 	<p>Halves: <u>4</u> way(s)            Thirds: <u>2</u> way(s)            Fourths: <u>4</u> way(s)</p>
<p>e.</p> 	<p>Halves: <u>4</u> way(s)            Thirds: <u>0</u> way(s)            Fourths: <u>2</u> way(s)</p>	<p>f.</p> 	<p>Halves: <u>4</u> way(s)            Thirds: <u>2</u> way(s)            Fourths: <u>4</u> way(s)</p>