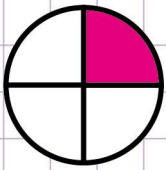


Name: Class:

Identify fractions

Tick the correct answer from the list below.

a.



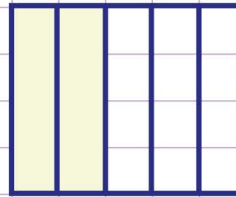
$\frac{2}{4}$

$\frac{1}{2}$

$\frac{1}{4}$

$\frac{3}{4}$

b.



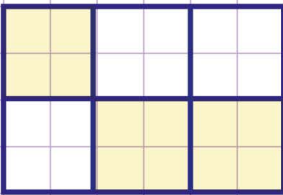
$\frac{2}{5}$

$\frac{1}{5}$

$\frac{3}{5}$

$\frac{5}{2}$

c.



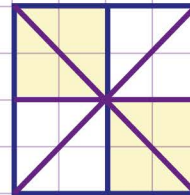
$\frac{3}{3}$

$\frac{3}{6}$

$\frac{6}{3}$

$\frac{4}{6}$

d.



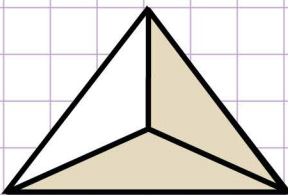
$\frac{7}{16}$

$\frac{8}{4}$

$\frac{2}{4}$

$\frac{4}{8}$

e.



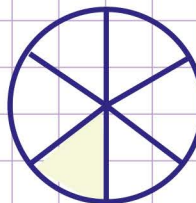
$\frac{1}{3}$

$\frac{3}{2}$

$\frac{2}{3}$

$\frac{3}{3}$

f.




$\frac{2}{6}$

$\frac{6}{1}$

$\frac{3}{6}$

$\frac{1}{6}$

g.




$\frac{2}{10}$

$\frac{1}{10}$

$\frac{10}{1}$

$\frac{5}{10}$

h.



$\frac{2}{9}$

$\frac{1}{9}$

$\frac{3}{9}$

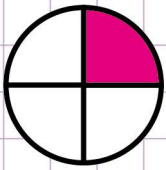
$\frac{9}{5}$

Name: Class:

Identify fractions

Tick the correct answer from the list below.

a.



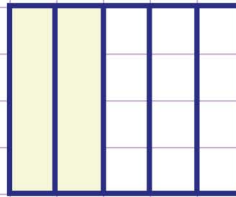
$\frac{2}{4}$

$\frac{1}{2}$

$\frac{1}{4}$

$\frac{3}{4}$

b.



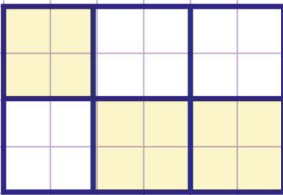
$\frac{2}{5}$

$\frac{1}{5}$

$\frac{3}{5}$

$\frac{5}{2}$

c.



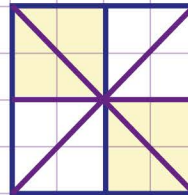
$\frac{3}{3}$

$\frac{3}{6}$

$\frac{6}{3}$

$\frac{4}{6}$

d.



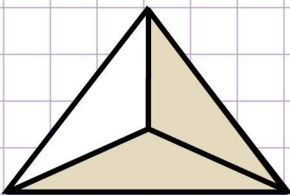
$\frac{7}{16}$

$\frac{8}{4}$

$\frac{2}{4}$

$\frac{4}{8}$

e.



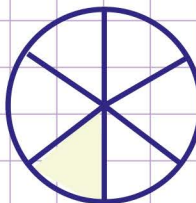
$\frac{1}{3}$

$\frac{3}{2}$

$\frac{2}{3}$

$\frac{3}{3}$

f.




$\frac{2}{6}$

$\frac{6}{1}$

$\frac{3}{6}$

$\frac{1}{6}$

g.




$\frac{2}{10}$

$\frac{1}{10}$

$\frac{10}{1}$

$\frac{5}{10}$

h.



$\frac{2}{9}$

$\frac{1}{9}$

$\frac{3}{9}$

$\frac{9}{5}$