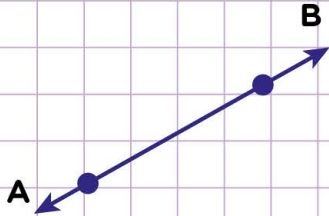


Name: ..... Class: .....

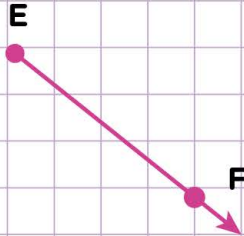
Identify points, lines, line segments, and rays

Look at the following pictures and write point, line, line segment or ray below each picture.

1.



2.



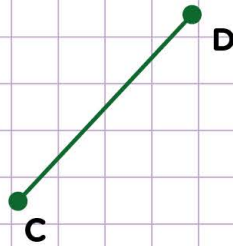
3.



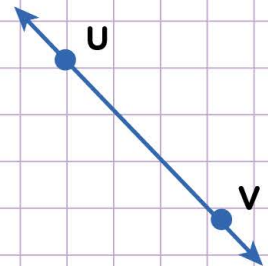
4.



5.



6.



7.



8.



9.

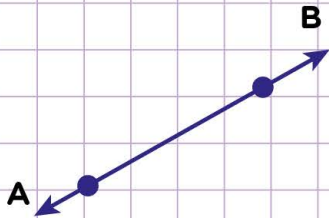


Name: ..... Class: .....

Identify points, lines, line segments, and rays

Look at the following pictures and write point, line, line segment or ray below each picture.

1.



A line

2.



A ray

3.



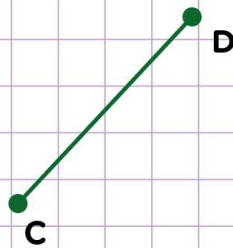
A line segment

4.



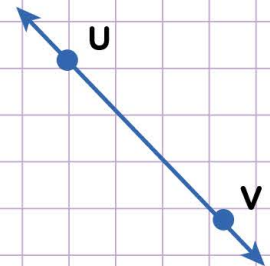
A line

5.



A line segment

6.



A line

7.



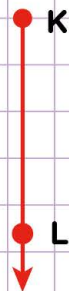
A ray

8.



Points

9.



A ray

