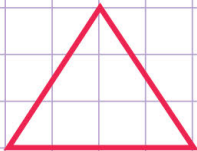


Name: ..... Class: .....

Is it a polygon?

A polygone is a closed plane figure that has three or more straight sides.


a. Is this figure a polygon?  
Justify your answer.



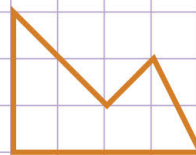
d. Is this figure a polygon?  
Justify your answer.



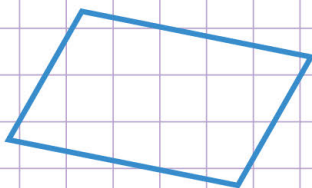
b. Is this figure a polygon?  
Justify your answer.



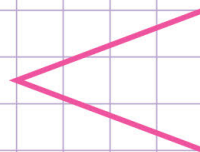
e. Is this figure a polygon?  
Justify your answer.



c. Is this figure a polygon?  
Justify your answer.



f. Is this figure a polygon?  
Justify your answer.

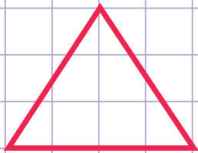


Name: ..... Class: .....

Is it a polygon?

A polygon is a closed plane figure that has three or more straight sides.

- a. Is this figure a polygon?  
Justify your answer.




Yes, it is a polygon because it is a closed plane figure with three straight sides.

- d. Is this figure a polygon?  
Justify your answer.




Yes, it is a polygon because it is a closed plane figure with five straight sides.

- b. Is this figure a polygon?  
Justify your answer.



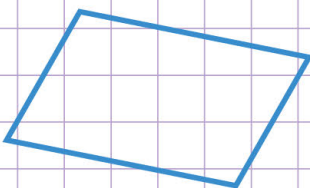
No, it is not a polygon because it is not a plane figure with straight sides.

- e. Is this figure a polygon?  
Justify your answer.



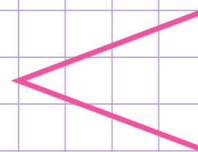
Yes, it is a polygon because it is a closed plane figure with five straight sides.

- c. Is this figure a polygon?  
Justify your answer.



Yes, it is a polygon because it is a closed plane figure with four straight sides.

- f. Is this figure a polygon?  
Justify your answer.



No, it is not a polygon because it is not a closed plane figure.