

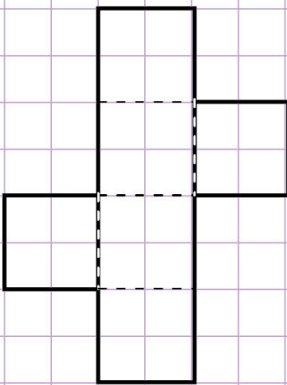
Name: Class:

Nets of three - dimensional figures

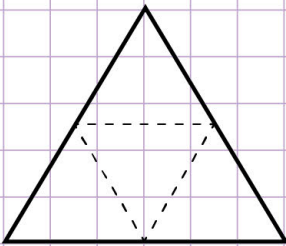
A net can be folded to make a 3- dimensional figure.

Draw the figure made by the following nets.

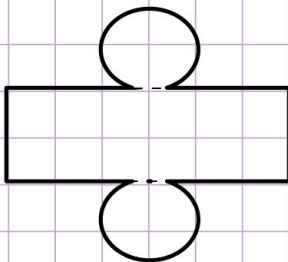
1.



2.



3.



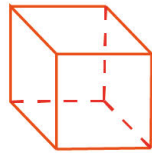
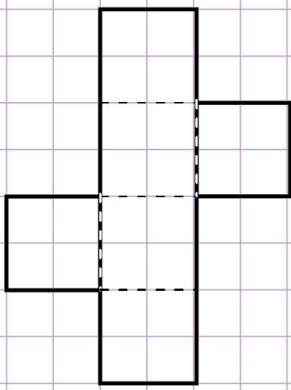
Name: Class:



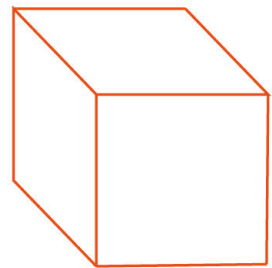
A net can be folded to make a 3- dimensional figure.

Draw the figure made by the following nets.

1.

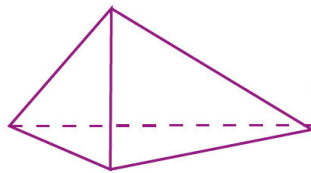
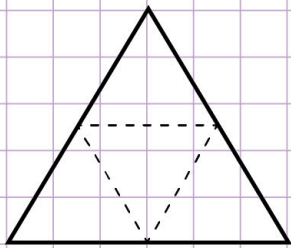


Visualise folding along the dotted lines to have this.

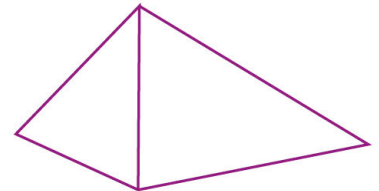


This net makes a square prism.

2.

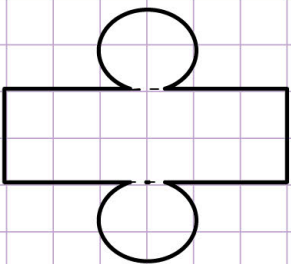


Visualise folding along the dotted lines to have this.




This net makes a triangular pyramid

3.



Visualise folding along the dotted lines to have this.



This net makes a cylinder