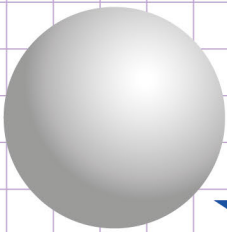


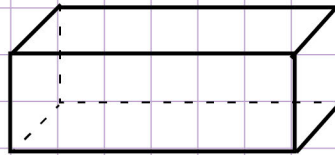
Name: ..... Class: .....

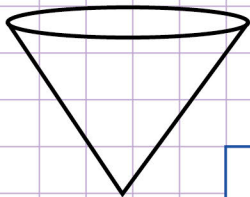
Identify three - dimensional figures

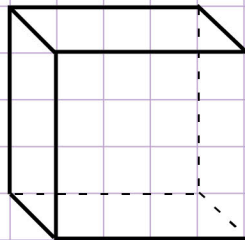
*A three - dimensional figure is a solid shape that has height, width, and depth.*

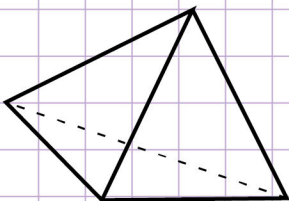
Identify the three - dimensional figures below by giving their names.

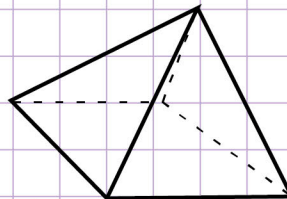


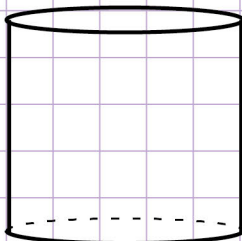












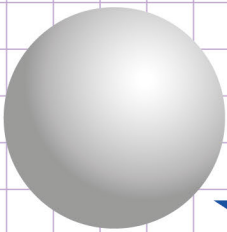


Name: ..... Class: .....

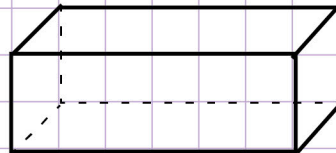
## Identify three - dimensional figures

*A three - dimensional figure is a solid shape that has height, width, and depth.*

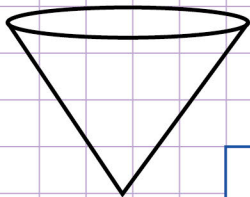
Identify the three - dimensional figures below by giving their names.



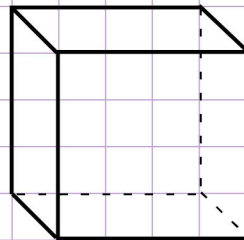
Sphere



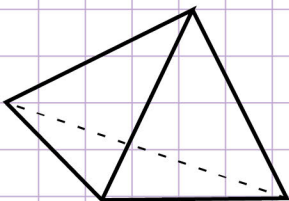
Rectangular prism



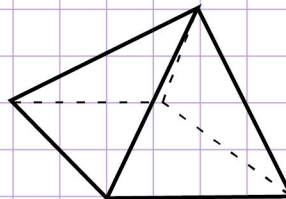
Cone



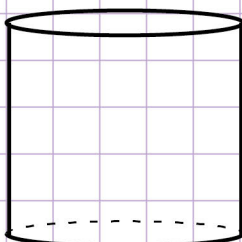
Cube



Triangular pyramid



Square pyramid



Cylinder

