


Name: ..... Class: .....

## Addition up to 5

In each case, add and write the correct number of objects.



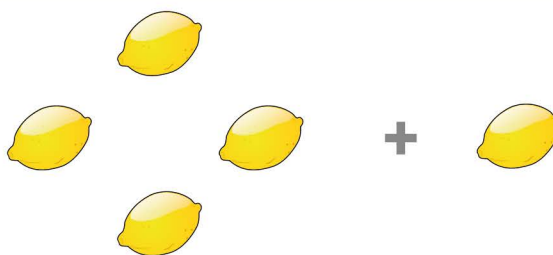
$$2 + 1 = \dots\dots$$



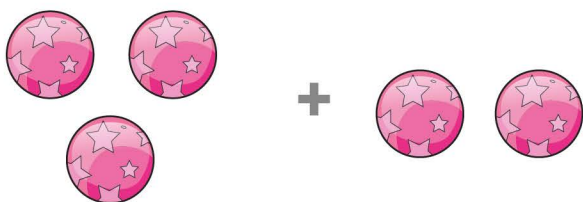
$$2 + 2 = \dots\dots$$



$$3 + 1 = \dots\dots$$



$$4 + 1 = \dots\dots$$



$$3 + 2 = \dots\dots$$



$$1 + 1 = \dots\dots$$

Name: ..... Class: .....

## Addition up to 5

In each case, add and write the correct number of objects.



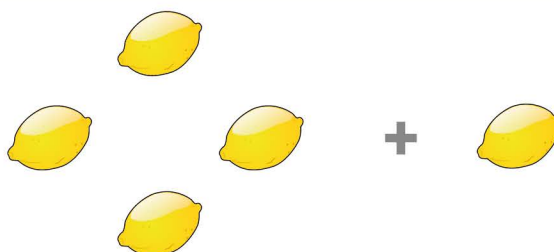
$$2 + 1 = 3$$



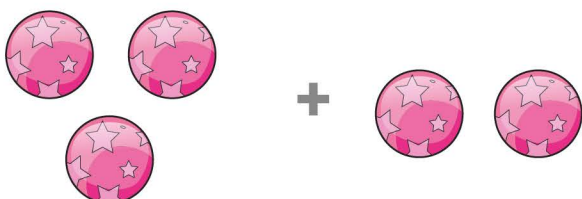
$$2 + 2 = 4$$



$$3 + 1 = 4$$



$$4 + 1 = 5$$



$$3 + 2 = 5$$



$$1 + 1 = 2$$