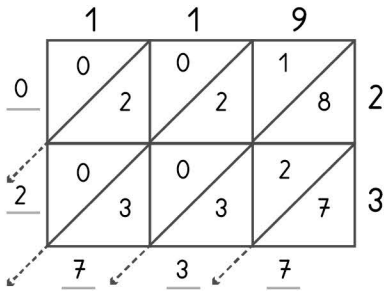


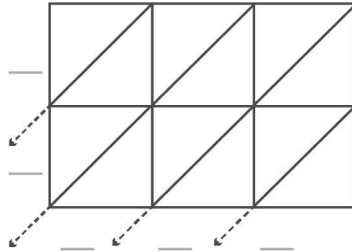
# 3

## -digit multiplication : Lattice method

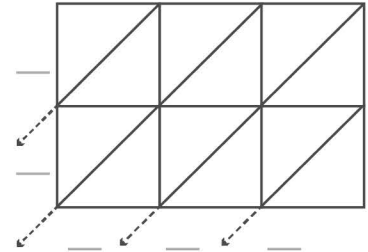
Work out the answers to these multiplication questions using the lattice method.



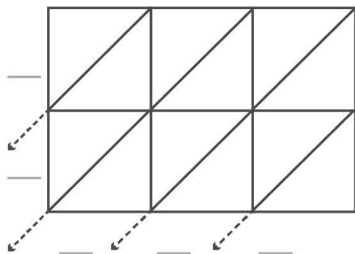
$119 \times 23 = 2737$



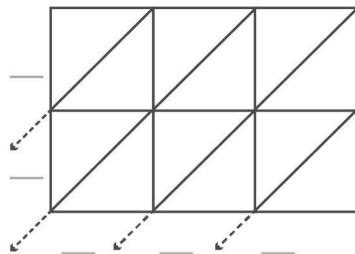
$254 \times 19 = \underline{\quad}$



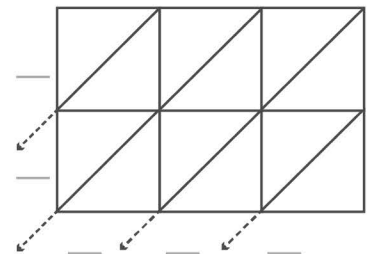
$223 \times 37 = \underline{\quad}$



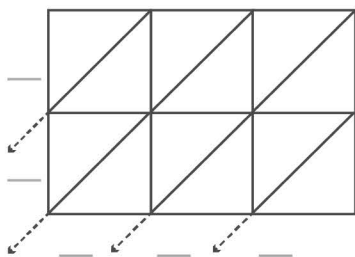
$197 \times 28 = \underline{\quad}$



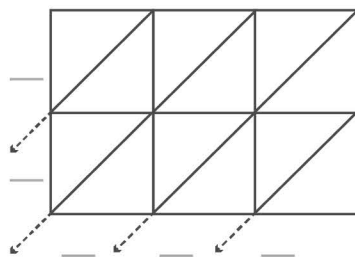
$163 \times 93 = \underline{\quad}$



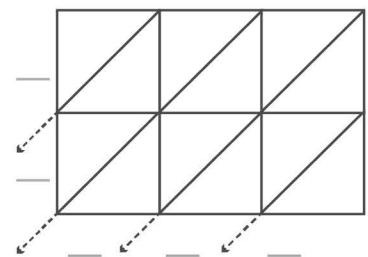
$152 \times 75 = \underline{\quad}$



$235 \times 71 = \underline{\quad}$



$269 \times 54 = \underline{\quad}$



$138 \times 99 = \underline{\quad}$