


Repeated addition for equal groups


For each model, write equal group as repeated addition.



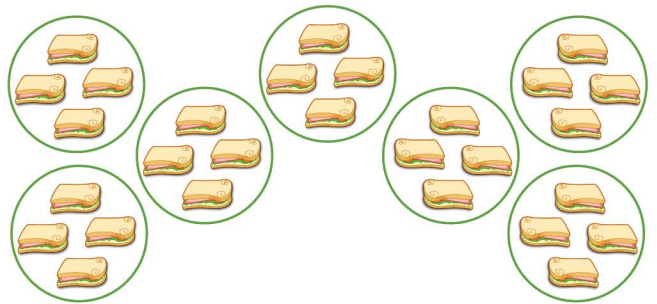
$$\underline{2} + \underline{2} + \underline{2} + \underline{2} + \underline{2} + \underline{2} + \underline{2} + \underline{2} + \underline{2} + \underline{2} =$$



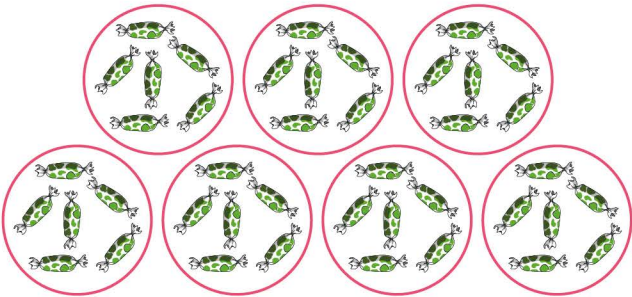
$$\underline{\quad} + \underline{\quad} + \underline{\quad} + \underline{\quad} =$$



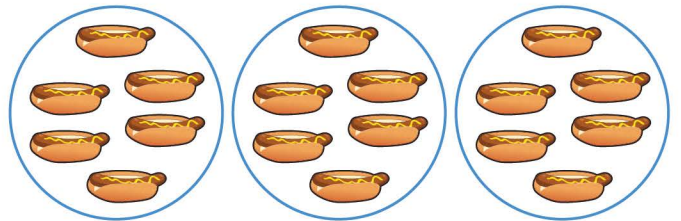
$$\underline{\quad} + \underline{\quad} + \underline{\quad} =$$




$$\underline{\quad} + \underline{\quad} + \underline{\quad} + \underline{\quad} + \underline{\quad} + \underline{\quad} =$$




$$\underline{\quad} + \underline{\quad} + \underline{\quad} + \underline{\quad} + \underline{\quad} =$$



$$\underline{\quad} + \underline{\quad} + \underline{\quad} =$$



$$\underline{\quad} + \underline{\quad} + \underline{\quad} + \underline{\quad} + \underline{\quad} + \underline{\quad} =$$



$$\underline{\quad} + \underline{\quad} =$$