





Name: ..... Class: .....





# Matching addition sentences with models: Up to 10







Mark the number which shows  $2 + 4 = 6$ .

	
+	+
	
1	2





Mark the number which shows  $3 + 3 = 6$ .

	
+	+
	
1	2





Mark the number which shows  $4 + 3 = 7$ .

	
+	+
	
1	2





Mark the number which shows  $2 + 2 = 4$ .

	
+	+
	
1	2

Mark the number which shows  $2 + 4 = 8$ .

	
+	+
	
1	2

Mark the number which shows  $4 + 4 = 8$ .

	
+	+
	
1	2

Mark the number which shows  $5 + 4 = 9$ .

	
+	+
	
1	2

Mark the number which shows  $5 + 5 = 10$ .





	
+	+
	
1	2

Name: ..... Class: .....





# Matching addition sentences with models: Up to 10







Mark the number which shows  $2 + 4 = 6$ .

 + 	 + 
<span style="border: 1px solid black; border-radius: 50%; padding: 5px;">1</span>	<span style="border: 1px solid black; border-radius: 50%; padding: 5px;">2</span>





Mark the number which shows  $3 + 3 = 6$ .

 + 	 + 
<span style="border: 1px solid black; border-radius: 50%; padding: 5px;">1</span>	<span style="border: 1px solid black; border-radius: 50%; padding: 5px;">2</span>





Mark the number which shows  $4 + 3 = 7$ .

 + 	 + 
<span style="border: 1px solid black; border-radius: 50%; padding: 5px;">1</span>	<span style="border: 1px solid black; border-radius: 50%; padding: 5px;">2</span>





Mark the number which shows  $2 + 2 = 4$ .

 + 	 + 
<span style="border: 1px solid black; border-radius: 50%; padding: 5px;">1</span>	<span style="border: 1px solid black; border-radius: 50%; padding: 5px;">2</span>





Mark the number which shows  $2 + 4 = 8$ .

 + 	 + 
<span style="border: 1px solid black; border-radius: 50%; padding: 5px;">1</span>	<span style="border: 1px solid black; border-radius: 50%; padding: 5px;">2</span>

Mark the number which shows  $4 + 4 = 8$ .

 + 	 + 
<span style="border: 1px solid black; border-radius: 50%; padding: 5px;">1</span>	<span style="border: 1px solid black; border-radius: 50%; padding: 5px;">2</span>

Mark the number which shows  $5 + 4 = 9$ .

 + 	 + 
<span style="border: 1px solid black; border-radius: 50%; padding: 5px;">1</span>	<span style="border: 1px solid black; border-radius: 50%; padding: 5px;">2</span>

Mark the number which shows  $5 + 5 = 10$ .

 + 	 + 
<span style="border: 1px solid black; border-radius: 50%; padding: 5px;">1</span>	<span style="border: 1px solid black; border-radius: 50%; padding: 5px;">2</span>