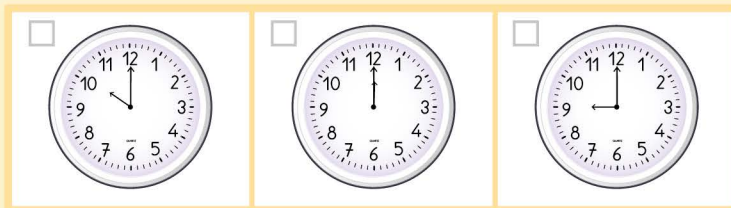


Name: ..... Class: .....

## Time and clock word problems

In each case read carefully then tick the correct clock.

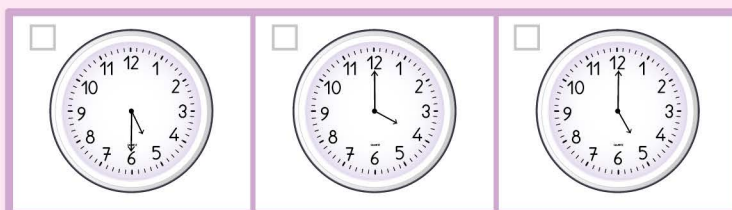
- Manuella started watching cartoons at 10 o'clock. If she watched it for 2 hours, at what time did she stop watching cartoons ?



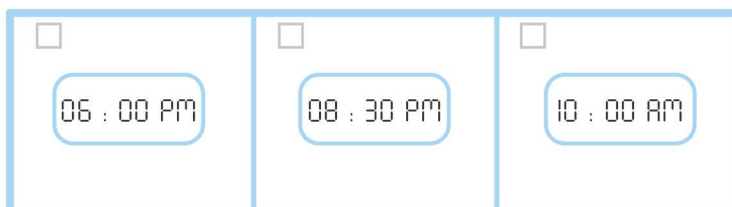
- Henry spends 1 hour every morning for sports. Knowing that today, he began at exactly 6 o'clock, what time was it when he finished ?



- My junior brother came back from school at 2 o'clock. He took a bath then went to take a nap. He slept for 3 hours. What time was it when he woke up ?



- Nathan and Loe went to watch their best movies of the year at the cinema. They arrived at 1 o'clock. If the movies were 5 hours long, at which time would they get out of the cinema ?




Name: ..... Class: .....


## Time and clock word problems

In each case read carefully then tick the correct clock.

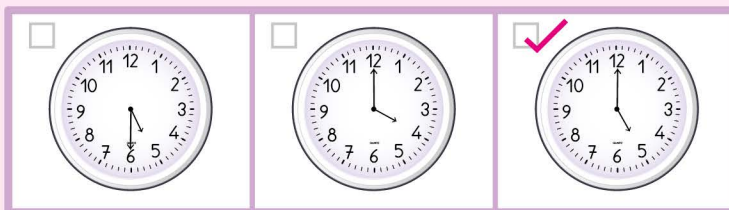
- ❖ Manuella started watching cartoons at 10 o'clock. If she watched it for 2 hours, at what time did she stop watching cartoons ?



- ❖ Henry spends 1 hour every morning for sports. Knowing that today, he began at exactly 6 o'clock, what time was it when he finished ?



- ❖ My junior brother came back from school at 2 o'clock. He took a bath then went to take a nap. He slept for 3 hours. What time was it when he woke up ?



- ❖ Nathan and Loe went to watch their best movies of the year at the cinema. They arrived at 1 o'clock. If the movies were 5 hours long, at which time would they get out of the cinema ?

