

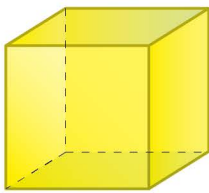
Name: Class:



Count vertexes, edges and faces

Color the correct answer.

How many vertexes does this shape have ?



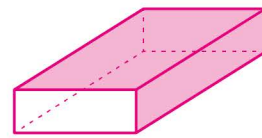
7

8

6

Color the correct answer.

How many edges does this shape have ?

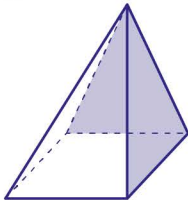


12

8

10

How many edges does this shape have ?

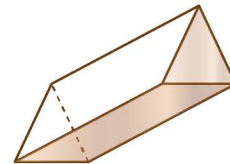


7

6

8

How many faces does this shape have ?

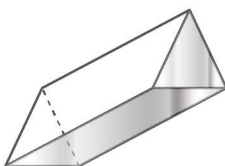


5

6

7

How many vertexes does this shape have ?

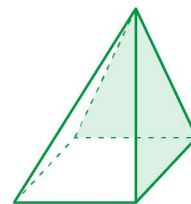


7

6

8

How many vertexes does this shape have ?



4

6

5

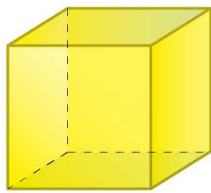
Name: Class:



Count vertexes, edges and faces

Color the correct answer.

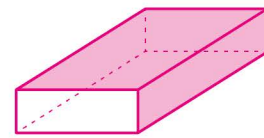
How many vertexes does this shape have ?



- 7 8 6

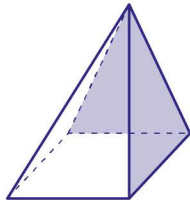
Color the correct answer.

How many edges does this shape have ?



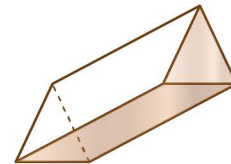
- 12 8 10

How many edges does this shape have ?



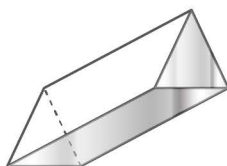
- 7 6 8

How many faces does this shape have ?



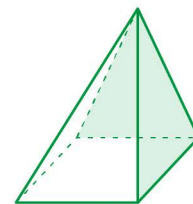
- 5 6 7

How many vertexes does this shape have ?



- 7 6 8

How many vertexes does this shape have ?



- 4 6 5