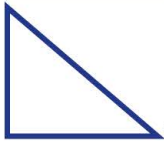






Name: ..... Class: .....

Ordinal numbers up to tenth

Note: ordinal numbers tell the exact position of an object.

1. What is the ordinal position of the shapes below starting from left to right?

2. Match the animals below with its correct ordinal position as numbered from a to h.



Cow

a.



Bird

e.



Horse

b.



pig

f.



Rabbit

c.



Sheep

g.



Cat

d.



Dog

h.

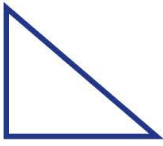




8th
4th
3rd
7th
2nd
1st
6th
5th

Name: ..... Class: .....









Ordinal numbers up to tenth

**Note:** ordinal numbers tell the exact position of an object.

1. What is the ordinal position of the shapes below starting from left to right?

				
First	Second	third	Fourth	Fifth

2. Match the animals below with its correct ordinal position as numbered from a to h.

	Cow	a.	<table border="1"> <tbody> <tr><td>8th</td></tr> <tr><td>4th</td></tr> <tr><td>3rd</td></tr> <tr><td>7th</td></tr> <tr><td>2nd</td></tr> <tr><td>1st</td></tr> <tr><td>6th</td></tr> <tr><td>5th</td></tr> </tbody> </table>	8th	4th	3rd	7th	2nd	1st	6th	5th	e.		Bird
8th														
4th														
3rd														
7th														
2nd														
1st														
6th														
5th														
	Horse	b.	f.		pig									
	Rabbit	c.	g.		Sheep									
	Cat	d.	h.		Dog									