

Name: Class:


How to find the next shape in a growing pattern

Look at the growing patterns below. Which pattern (shapes) comes next?


1.



2.




3.



4.



5.



6.



7.



8.



Name: Class:

How to find the next shape in a growing pattern

Look at the growing patterns below. Which pattern (shapes) comes next?

1.	
2.	
3.	
4.	
5.	
6.	
7.	
8.	