

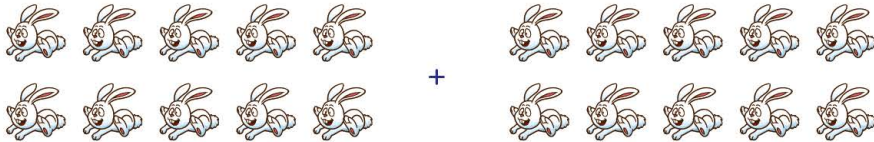
Name: Class:

Adding numbers using pictures with sums to or less than 20


Add the following objects and write the sum.

1.  = ____ Circles

2.  = ____ parrots

3.  = ____ rabbits

4.  = ____ carrots

5.  = ____ cats

6.  = ____ chairs

Name: Class:

Adding numbers using pictures with sums to or less than 20

Add the following objects and write the sum.

1.  +  = _____



To find the sum, let's count all the circles together as shown below.

  +           = 12 circles



We have 2 circles + 10 circles = 12 circles



So, $2 + 10 = 12$.

2.  +  = 15 parrots

3.  +  = 20 rabbits

4.  +  = 12 carrots

5.  +  = 18 cats

6.  +  = 19 chairs