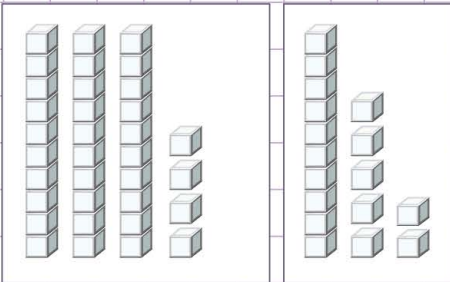


Name: Class:

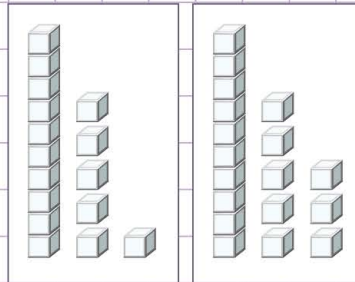
Adding 2-digits numbers with regrouping using models

1. Use the model below to add 34 and 17.

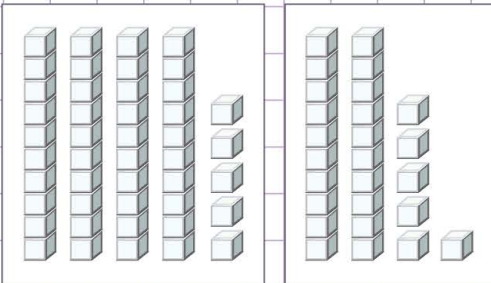


$34 + 17 = \underline{\hspace{2cm}}$

4. Use the model below to add 16 and 18.



2. Use the model below to add 45 and 26.



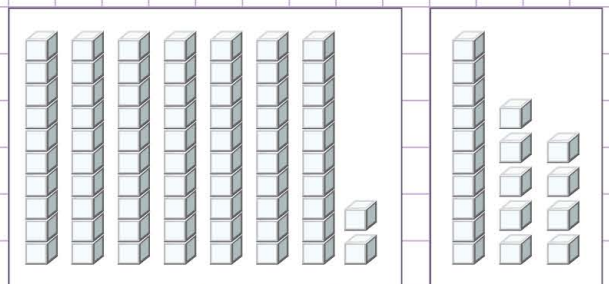
5. Use the model below to add 31 and 39.



3. Use the model below to add 24 and 28.



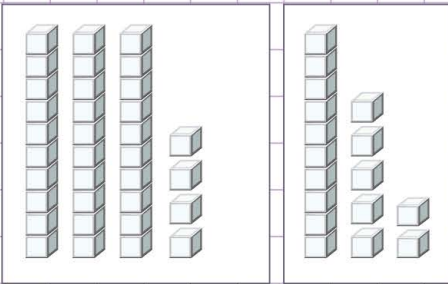
6. Use the model below to add 72 and 19.



Name: Class:

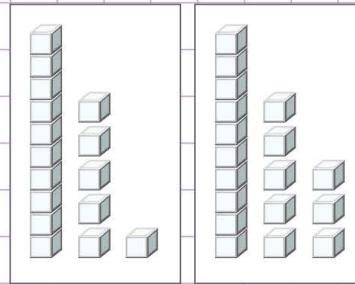
Adding 2-digits numbers with regrouping using models

1. Use the model below to add 34 and 17.



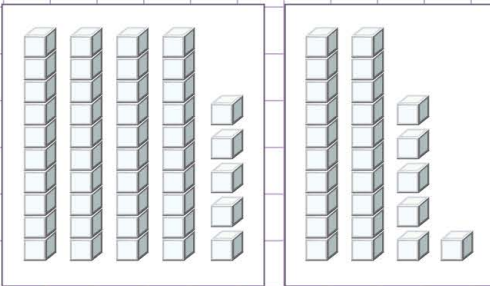
$34 + 17 = \underline{51}$

4. Use the model below to add 16 and 18.



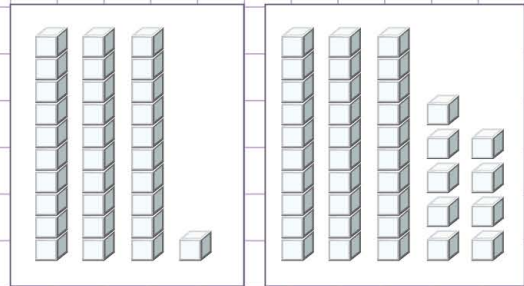
$16 + 18 = \underline{34}$

2. Use the model below to add 45 and 26.



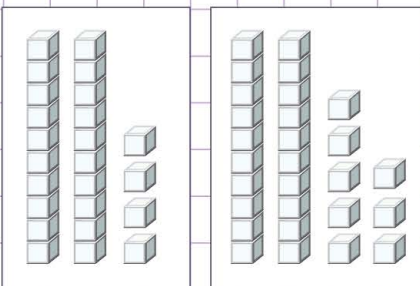
$45 + 26 = \underline{71}$

5. Use the model below to add 31 and 39.



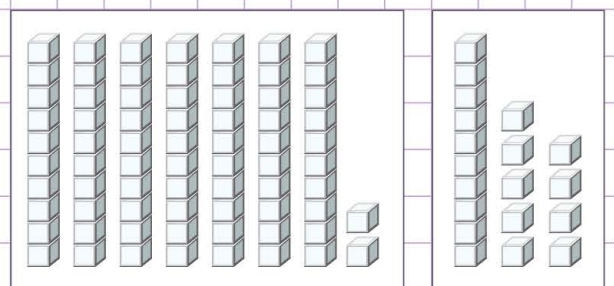
$31 + 39 = \underline{70}$

3. Use the model below to add 24 and 28.



$24 + 28 = \underline{52}$

6. Use the model below to add 72 and 19.



$72 + 19 = \underline{91}$

