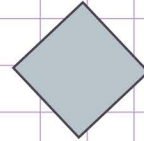
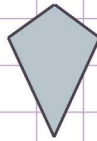
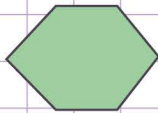



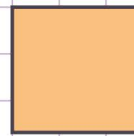
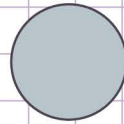

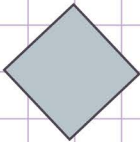
Name: Class:

Which figure has equal sides?

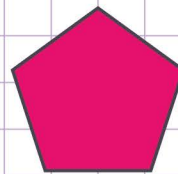
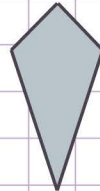
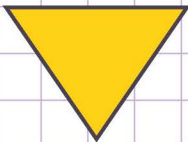
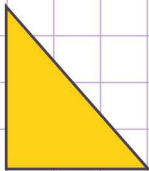
1. Which figure has 6 equal sides?



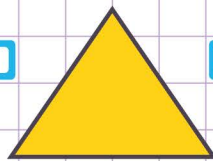
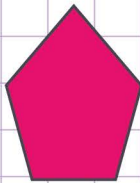
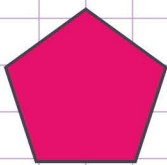
2. Which figure(s) has 4 equal sides?



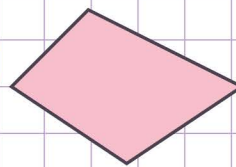

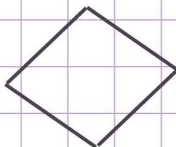
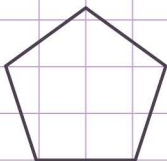
3. Which figure has 3 equal sides?



4. Which figure has 5 equal sides?



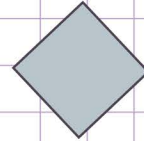
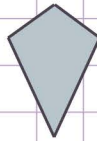
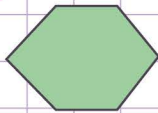

5. Which figure has 4 equal sides?



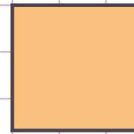
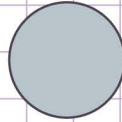

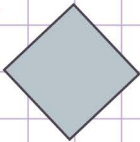
Name: Class:

Which figure has equal sides?

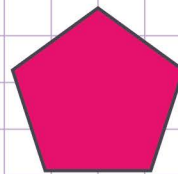
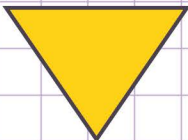
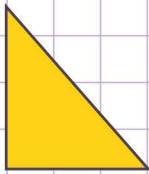
1. Which figure has 6 equal sides?



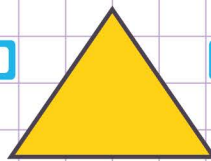

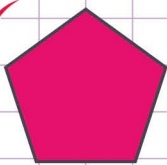
2. Which figure(s) has 4 equal sides?



3. Which figure has 3 equal sides?



4. Which figure has 5 equal sides?



5. Which figure has 4 equal sides?

