

Name: Class:

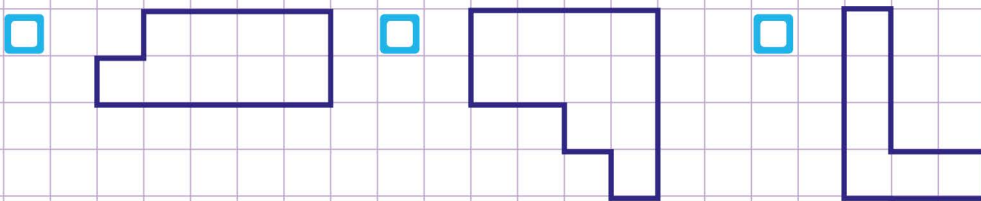
Select shapes with a given area



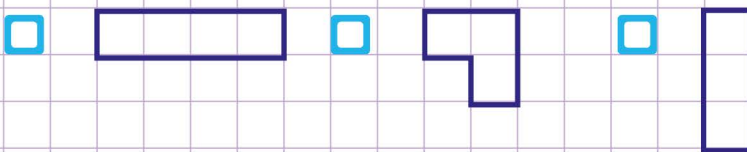
a. Choose the shape(s) that has an area of 6 square units.



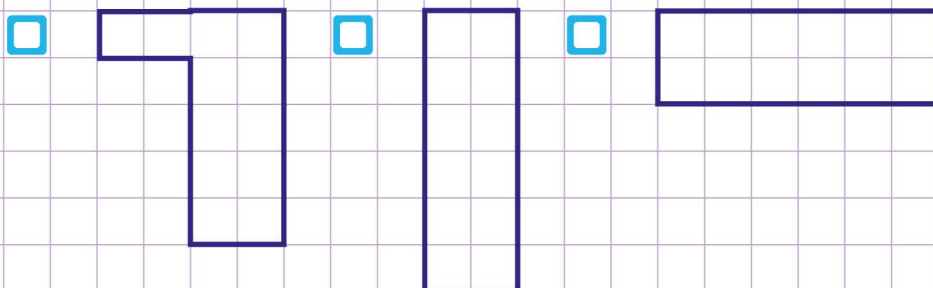
b. Choose the shape(s) that has an area of 11 square units.



c. Choose the shape(s) that has an area of 3 square units.



d. Choose the shape(s) that has an area of 12 square units.

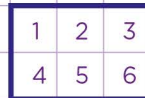


Name: Class:

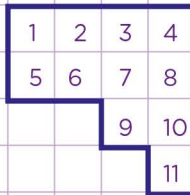
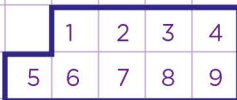
Select shapes with a given area



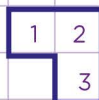
a. Choose the shape(s) that has an area of 6 square units.



b. Choose the shape(s) that has an area of 11 square units.



c. Choose the shape(s) that has an area of 3 square units.



d. Choose the shape(s) that has an area of 12 square units.

