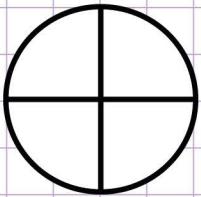


Name: ..... Class: .....

Identifying halves, thirds, and fourths

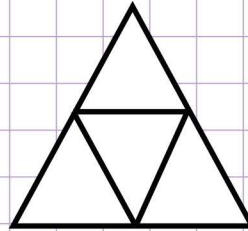
Fill in the blanks below with either halves, thirds, or fourths.

a.



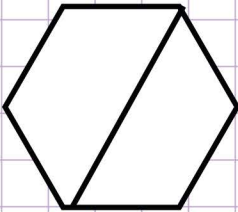
This shape shows:

b.



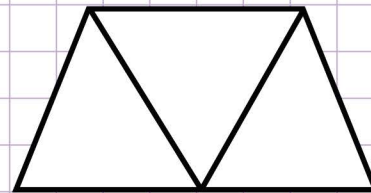
This shape shows:

c.



This shape shows:

d.



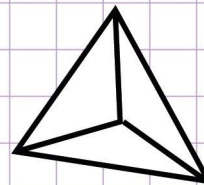
This shape shows:

e.




This shape shows:

f.




This shape shows:

g.



This shape shows:

h.



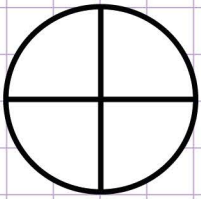
This shape shows:

Name: ..... Class: .....

## Identifying halves, thirds, and fourths

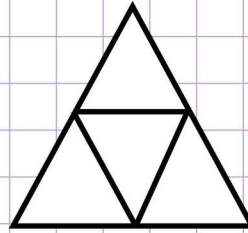
Fill in the blanks below with either halves, thirds, or fourths.

a.



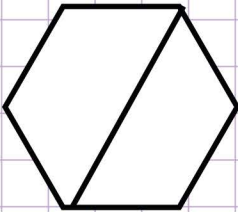
This shape shows: fourths.

b.



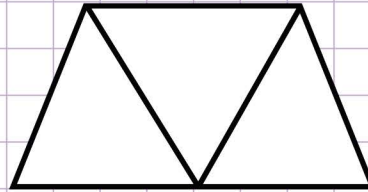
This shape shows: fourths.

c.



This shape shows: halves.

d.



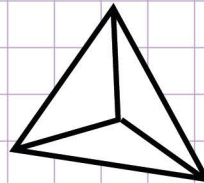
This shape shows: Thirds.

e.




This shape shows: Halves.

f.



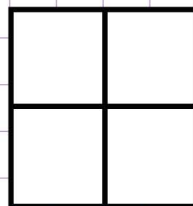
This shape shows: Thirds.

g.



This shape shows: Halves.

h.



This shape shows: fourths.