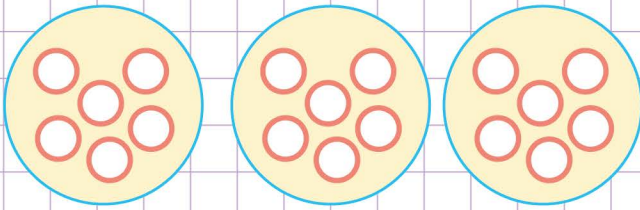


Name: ..... Class: .....

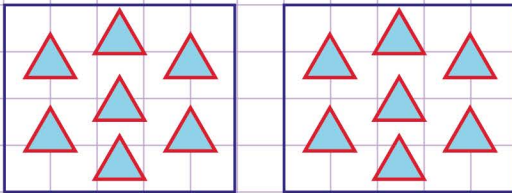
How to write division sentences for groups

Write a division sentence that describes each model below.


a.




b.



c.



d.

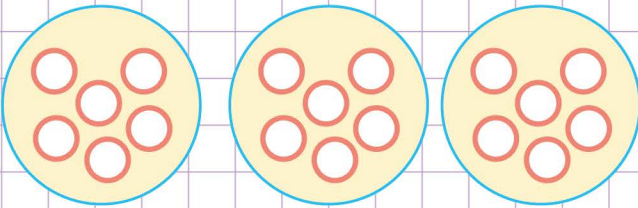


Name: ..... Class: .....

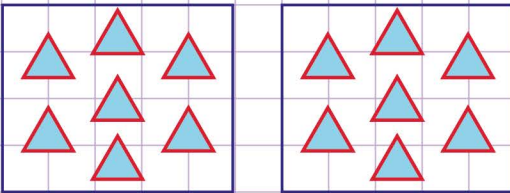
## How to write division sentences for groups

Write a division sentence that describes each model below.


a.

The division sentence is  $18 \text{ circles} \div 3 = 6 \text{ circles}$ .


b.

The division sentence is  $14 \text{ triangles} \div 2 = 7 \text{ triangles}$ .

c.

The division sentence is  $12 \text{ hearts} \div 6 = 2 \text{ hearts}$ .

d.

The division sentence is  $16 \text{ stars} \div 4 = 4 \text{ stars}$