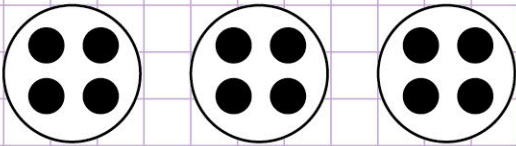


Name: Class:

Multiplication sentences: equal groups

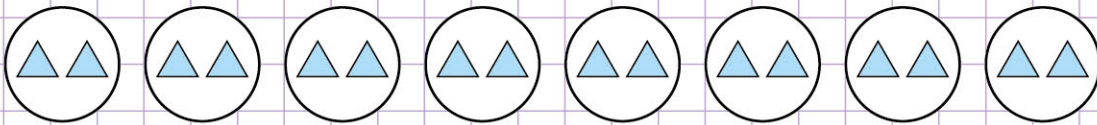
Identify the multiplication sentence that describe the following models

1.




- 3×4
 3×1
 3×3
 3×2

2.



- 8×1
 8×8
 8×2
 8×4

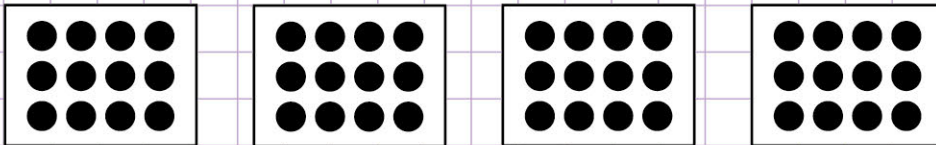
3.



- 5×4
 5×3
 5×1
 5×2



4.



- 4×12
 4×9
 4×4
 4×10

5.




- 4×5
 6×3
 6×6
 6×4

Name: Class:

Multiplication sentences: equal groups

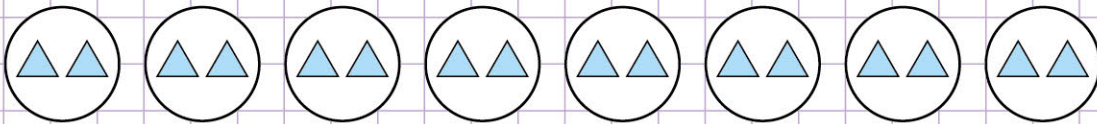
Identify the multiplication sentence that describe the following models

1.



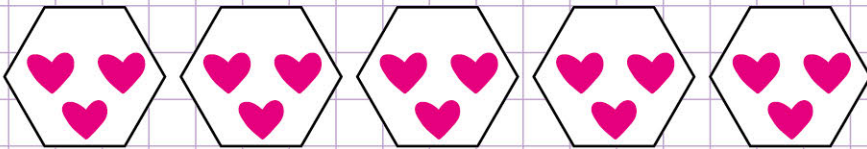
- 3×4
 3×1
 3×3
 3×2

2.



- 8×1
 8×8
 8×2
 8×4

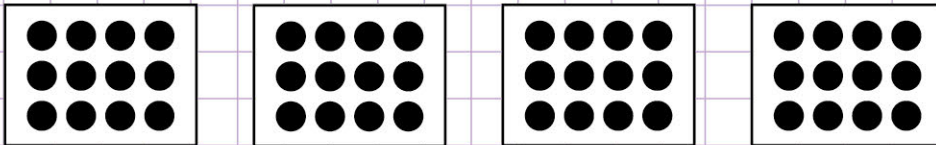
3.



- 5×4
 5×3
 5×1
 5×2



4.



- 4×12
 4×9
 4×4
 4×10

5.



- 4×5
 6×3
 6×6
 6×4