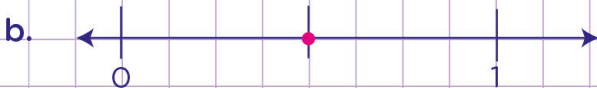


Name: ..... Class: .....

How to identify unit fractions on number lines

Write down the fraction that the number lines below show.



Name: ..... Class: .....

How to identify unit fractions on number lines

Write down the fraction that the number lines below show.

a.



Let's first of all count the number of parts the number line is divided into



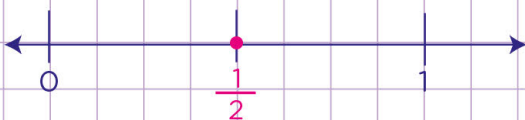
There are four parts between 0 and 1

Secondly, let's find the length of each part.

There are four equal parts, so each part has a length of  $\frac{1}{4}$




b.



c.



d.



e.

