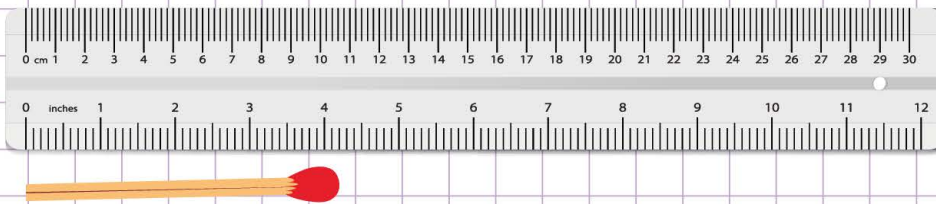


Name: Class:

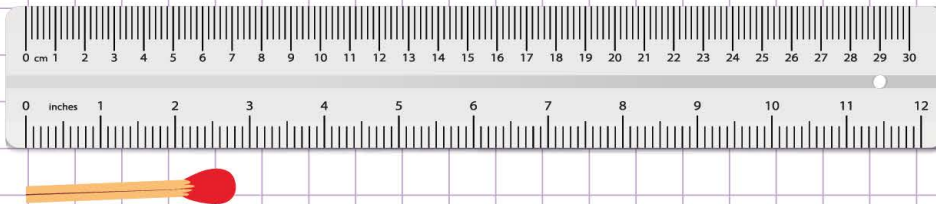
How to measure using an inch ruler

Use the given ruler to measure the length of the following objects to the nearest inch

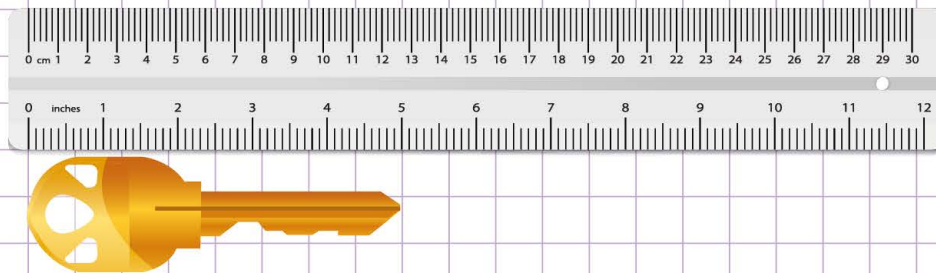
a. A match stick.



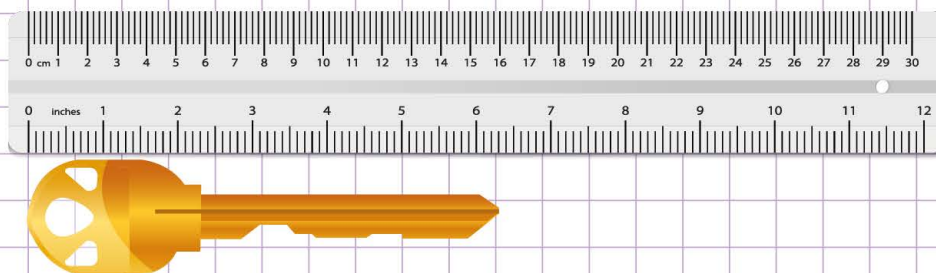
b. A match stick.



c. A key.



d. A key.



Name: Class:

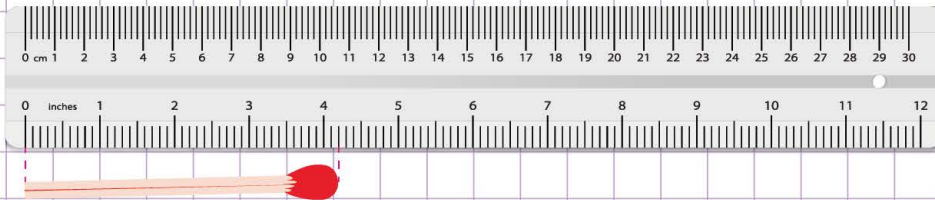
How to measure using an inch ruler

Use a ruler to measure the length of the following objects to the nearest inch

a. A match stick.

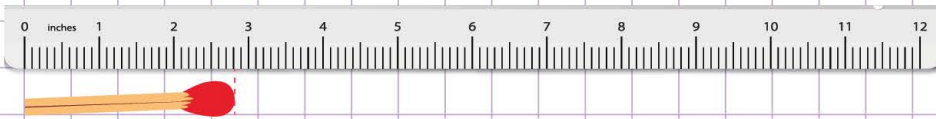


Place the mark zero on the ruler at the left end of the matchstick.

Then read the mark of the ruler where the right end ends.
you see that it ends at the mark 4.2 inch.

So, a matchstick is 4.2 inches long.

b. A match stick.



The matchstick is 2.8 inches long.

c. A key.



The key is 5.0 inches long.

d. A key.



The key is 6.3 inches long.

