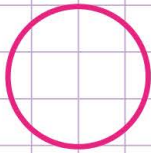


Name: Class:

Identify open and closed shapes

Are the following shapes open or closed? Tick the correct answer.

a.



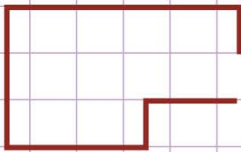
a. Closed b. Open

e.



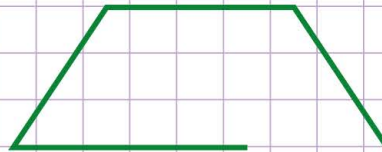
a. Closed b. Open

b.



a. Open b. Closed

f.



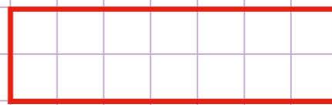
a. Open b. Closed

c.



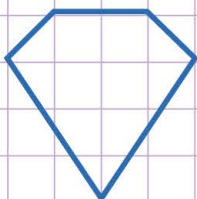
a. Closed b. Open

g.



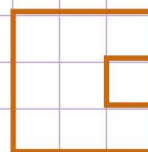
a. Closed b. Open

d.



a. Closed b. Open

h.



a. Open b. Closed

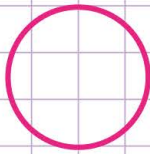


Name: Class:

Identify open and closed shapes

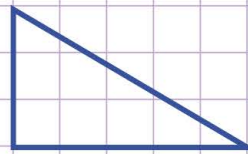
Are the following shapes open or closed? Tick the correct answer.

a.



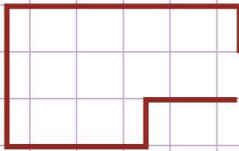
a. Closed b. Open

e.



a. Closed b. Open

b.



a. Open b. Closed

f.



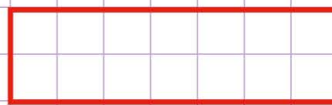
a. Open b. Closed

c.



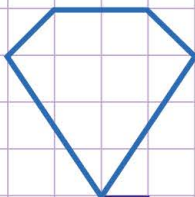
a. Closed b. Open

g.



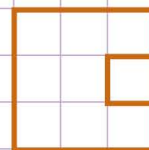
a. Closed b. Open

d.



a. Closed b. Open

h.



a. Open b. Closed

