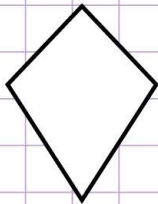


Name: ..... Class: .....

Parallel sides in quadrilaterals

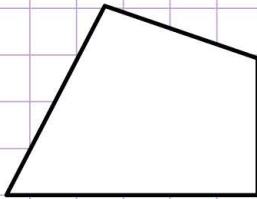
How many pairs of opposite sides are parallel in the following figures?

a.



No pairs     1 pair     2 pairs

b.



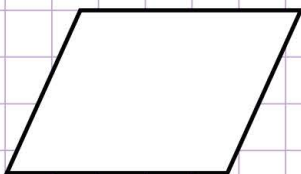
No pairs     1 pair     2 pairs

c.




No pairs     1 pair     2 pairs

d.



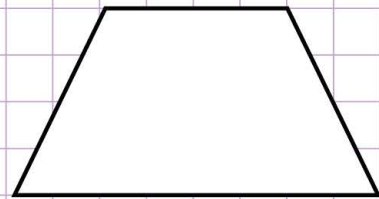
No pairs     1 pair     2 pairs

e.



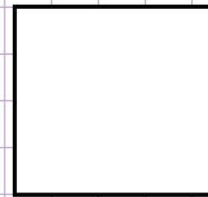
No pairs     1 pair     2 pairs

f.



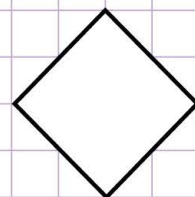
No pairs     1 pair     2 pairs

g.



No pairs     1 pair     2 pairs

h.



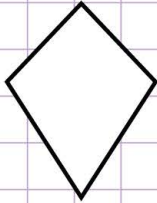
No pairs     1 pair     2 pairs

Name: ..... Class: .....

Parallel sides in quadrilaterals

How many pairs of opposite sides are parallel in the following figures?

a.



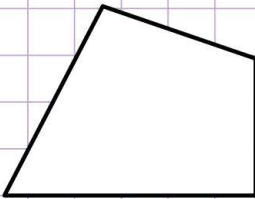
- No pairs     1 pair     2 pairs

e.



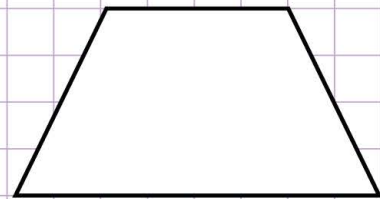
- No pairs     1 pair     2 pairs

b.



- No pairs     1 pair     2 pairs

f.




- No pairs     1 pair     2 pairs

c.



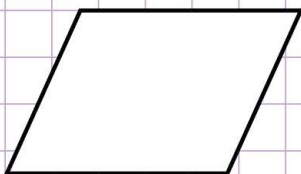
- No pairs     1 pair     2 pairs

g.



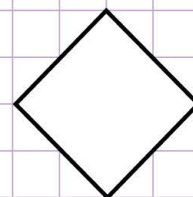
- No pairs     1 pair     2 pairs

d.



- No pairs     1 pair     2 pairs

h.



- 0 pairs     1 pair     2 pairs