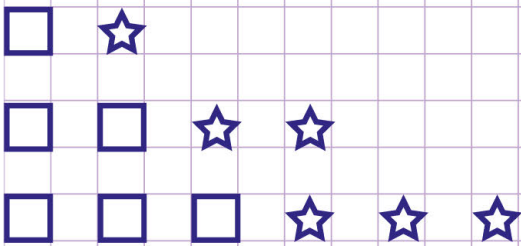


Name: Class:

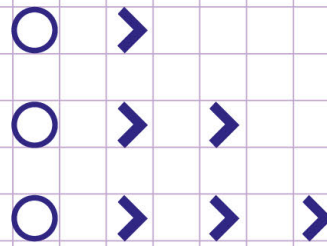
Find the next row in growing pattern of shapes

Find the row(s) that comes next in the following patterns.

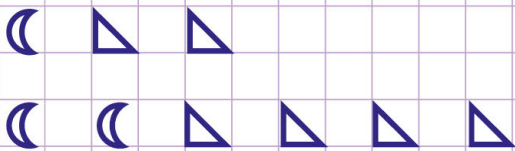
a.



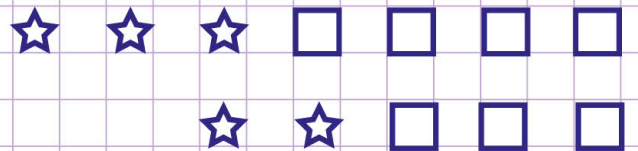
b.



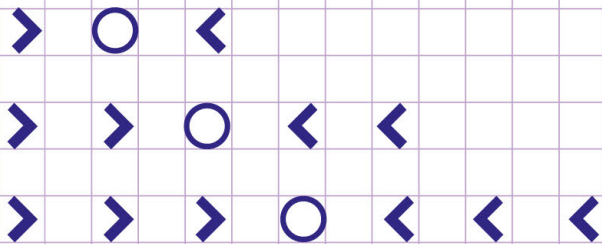
c.



d.



e.



Name: Class:

Find the next row in growing pattern of shapes

Find the row(s) that comes next in the following patterns.

| | |
|------------------|------------------|
| <p>a.</p> | <p>b.</p> |
| <p>c.</p> | <p>d.</p> |
| <p>e.</p> | |