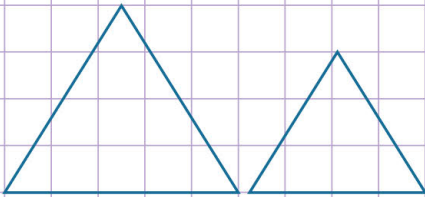


Name: ..... Class: .....

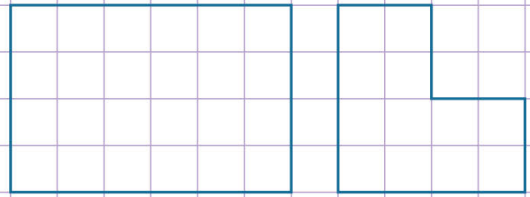
Identify congruent figures

Congruent figures are figures with the same size and the same shape.  
Say whether the following figures are congruent or not. Justify your answer.

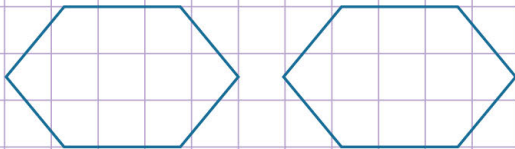
a.



d.



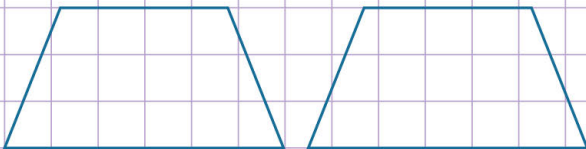
b.



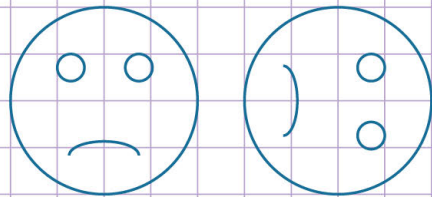
e.



c.



f.

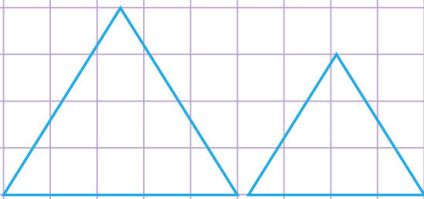


Name: ..... Class: .....

## Identify congruent figures

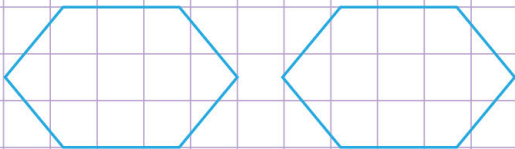
Congruent figures are figures with the same size and the same shape.  
Say whether the following figures are congruent or not. Justify your answer.

a.



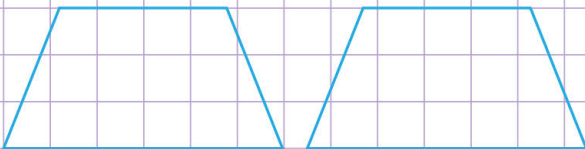
No, these figures are not congruent because they do not have the same size even though they are of the same shape.

b.



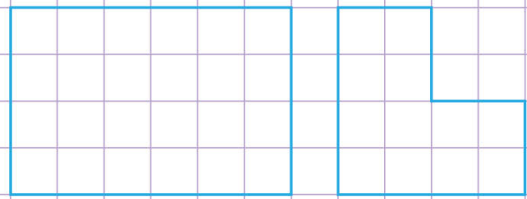
Yes, these figures are congruent because they have the same size and the same shape.

c.



Yes, these figures are congruent because they have the same size and the same shape.

d.



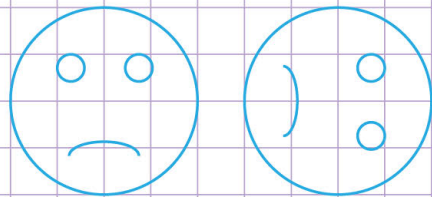
No, these figures are not congruent because they do not have the same shape.

e.



Yes, these figures are congruent because they have the same size and the same shape.

f.



Yes, these figures are congruent because they have the same size and the same shape.