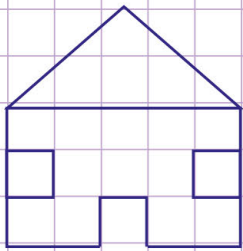


Name: Class:

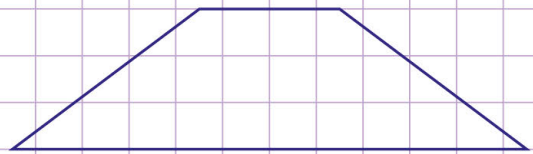
Count lines of symmetry

State the number of lines each object or figure has. Tick the correct answer.

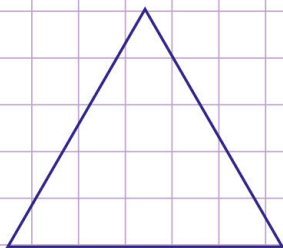
1.




1 2 3 4



1 2 3 4



1 2 3 4



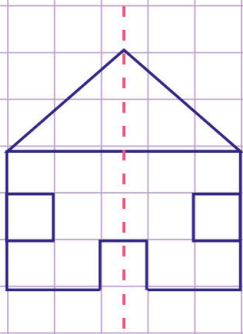
1 2 3 4

Name: Class:

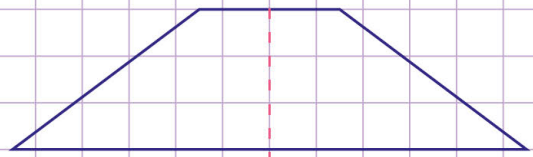
Count lines of symmetry

State the number of lines each object or figure has. Tick the correct answer.

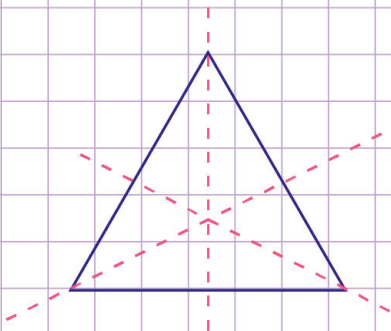
1.



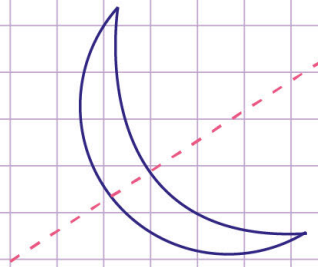
- 1
 2
 3
 4



- 1
 2
 3
 4



- 1
 2
 3
 4



- 1
 2
 3
 4