


Name: ..... Class: .....

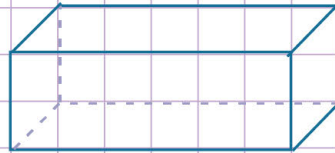
Identify three - dimensional figures.

A three - dimensional figure is a solid shape that has height, width, and depth.

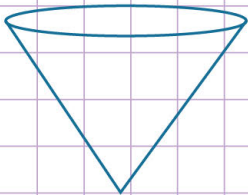
Identify the three - dimensional figures below by giving their names.



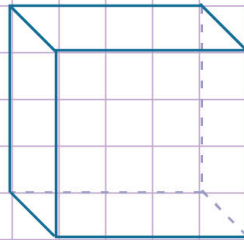
\_\_\_\_\_



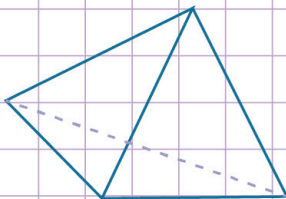
\_\_\_\_\_



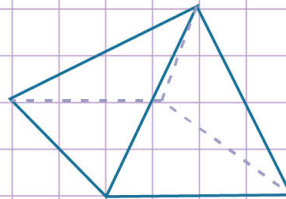
\_\_\_\_\_



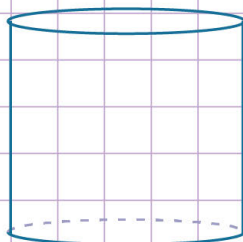
\_\_\_\_\_



\_\_\_\_\_



\_\_\_\_\_



\_\_\_\_\_

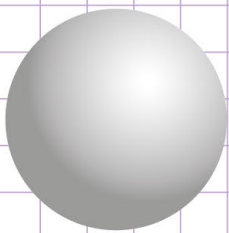


Name: ..... Class: .....

Identify three - dimensional figures.

A three - dimensional figure is a solid shape that has height, width, and depth.

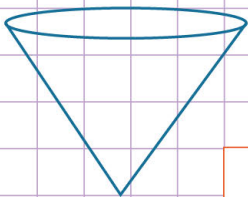
Identify the three - dimensional figures below by giving their names.



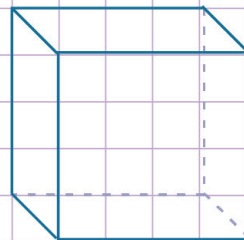
Sphere



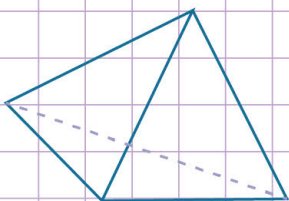
Rectangular prism



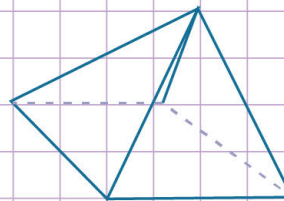
Cone



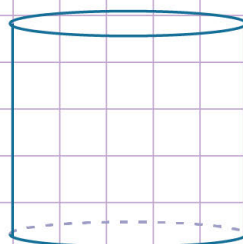
Cube



Triangular pyramid



Square pyramid



Cylinder