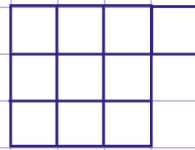
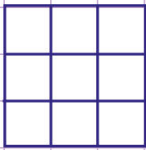


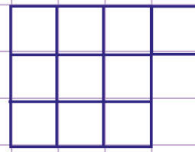
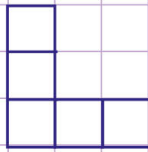
Name: Class:

Select figures with a given or with the same area


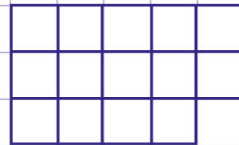
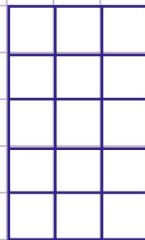

1. Select the figure that has an area of 9 square units.






2. Select any figures with the same area from the list below.



3. Select the figure that has an area of 14 square units.



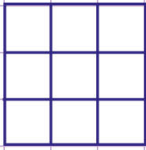
4. Select any figures with the same area from the list below.



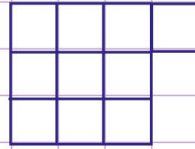

Name: Class:

Select figures with a given or with the same area


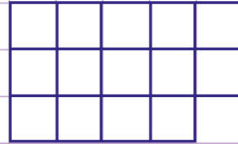
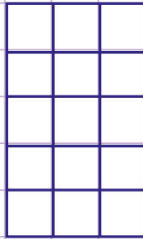

1. Select the figure that has an area of 9 square units.



2. Select any figures with the same area from the list below.



3. Select the figure that has an area of 14 square units.



4. Select any figures with the same area from the list below.

