


Name: Class:

Multiplication input/output tables

Fill in the missing numbers in the tables.

To find the output multiply the input value by the rule



a.

Rule: $\times 2$	
Input	Output
2	
4	
6	
8	

b.

Rule: $\times 11$	
Input	Output
0	
5	
10	
15	

c.

Rule: $\times 6$	
Input	Output
1	
2	
3	
4	

d.


Rule: $\times 7$	
Input	Output
4	
5	
6	
7	
10	

e.

Rule: $\times 13$	
Input	Output
0	
3	
6	
9	
10	

f.

Rule: $\times 10$	
Input	Output
5	
10	
15	
20	
40	




Name: Class:

Multiplication input/output tables

Fill in the missing numbers in the tables.

To find the output multiply the input value by the rule



a.

Rule: $\times 2$	
Input	Output
2	4
4	8
6	12
8	16

b.

Rule: $\times 11$	
Input	Output
0	0
5	55
10	110
15	165

c.

Rule: $\times 6$	
Input	Output
1	6
2	12
3	18
4	24

d.

Rule: $\times 7$	
Input	Output
4	28
5	35
6	42
7	49
10	70

e.

Rule: $\times 13$	
Input	Output
0	0
3	39
6	78
9	117
10	130

f.

Rule: $\times 10$	
Input	Output
5	50
10	100
15	150
20	200
40	400

