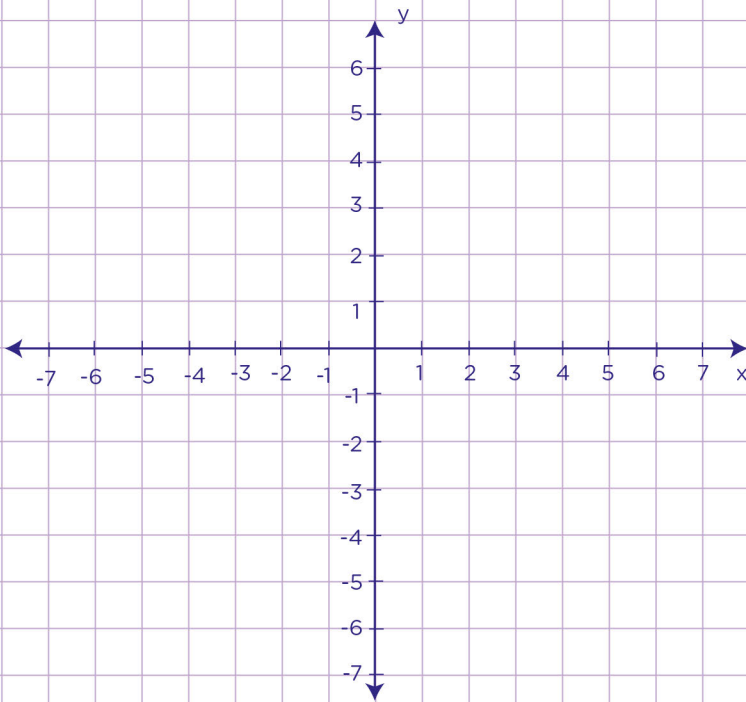


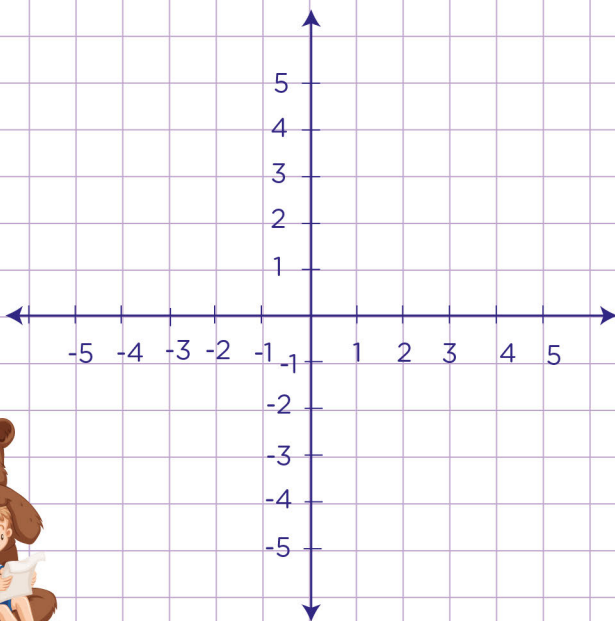
Name: Class:

Follow directions on a coordinate plane

a. Given that you start at the point $(-2, 5)$ and you move left 3 units. Where do you end?



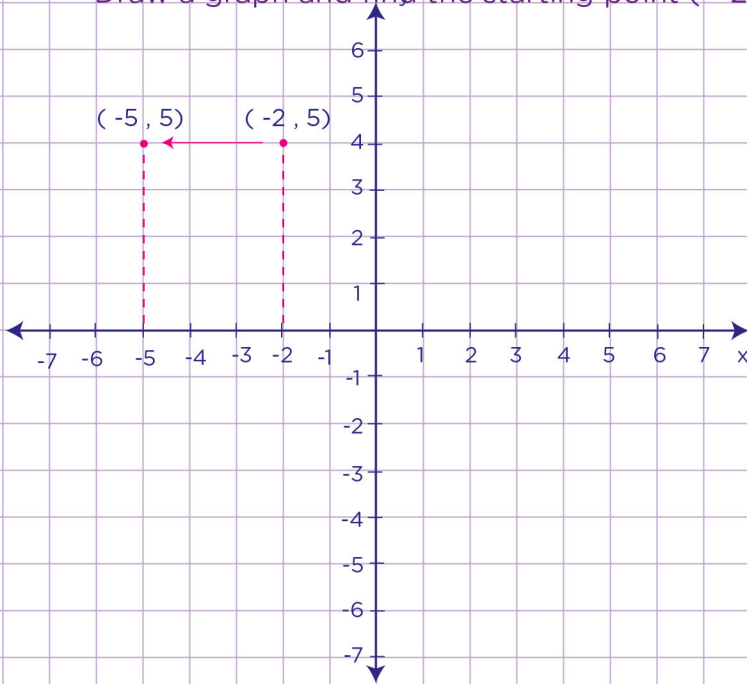
b. Given that you start at the point $(0, 3)$ and you move down 6 units. Where do you end?



Name: Class:

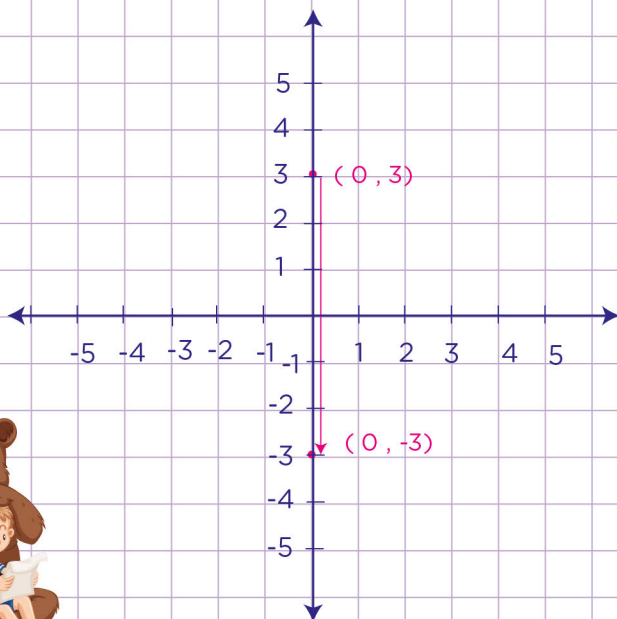
Follow directions on a coordinate plane

- a. Given that you start at the point $(-2, 5)$ and you move left 3 units. Where do you end?
Draw a graph and find the starting point $(-2, 5)$.



Move left 3 units.
You will end at $(-5, 5)$.

- b. Given that you start at the point $(0, 3)$ and you move down 6 units. Where do you end?
Draw a graph and find the starting point $(0, 3)$.



Move down 6 units.
Show the movement down 6 units on the graph with an arrow.
You will end at $(0, -3)$.

