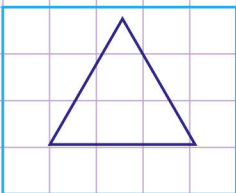


Name: ..... Class: .....

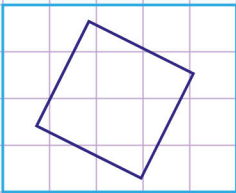
Number of sides in polygons

Count the number of sides of each polygon below giving its name and number of sides.



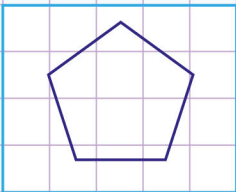
Name of polygon \_\_\_\_\_

Number of sides \_\_\_\_\_



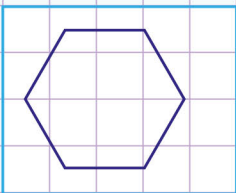
Name of polygon \_\_\_\_\_

Number of sides \_\_\_\_\_



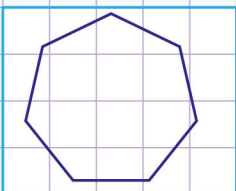
Name of polygon \_\_\_\_\_

Number of sides \_\_\_\_\_



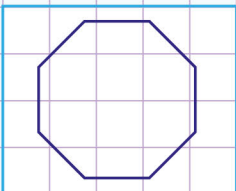
Name of polygon \_\_\_\_\_

Number of sides \_\_\_\_\_




Name of polygon \_\_\_\_\_

Number of sides \_\_\_\_\_



Name of polygon \_\_\_\_\_

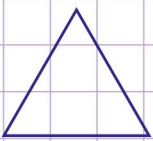
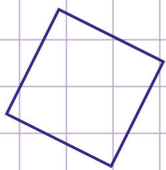
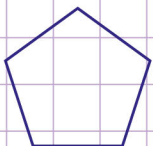
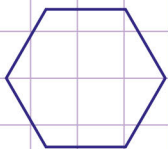
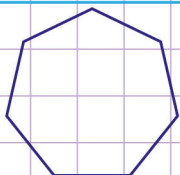
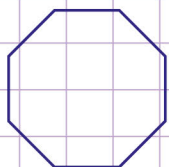
Number of sides \_\_\_\_\_



Name: ..... Class: .....

## Number of sides in polygons

Count the number of sides of each polygon below giving its name and number of sides.

Name of polygon TriangleNumber of sides 3Name of polygon QuadrilateralNumber of sides 4Name of polygon PentagonNumber of sides 5Name of polygon HexagonNumber of sides 6Name of polygon HeptagonNumber of sides 7Name of polygon OctagonNumber of sides 8