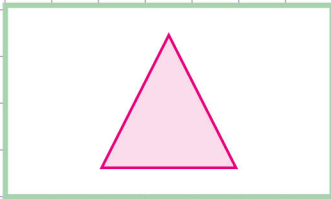


Name: ..... Class: .....

Classify triangles

1. Classify the following triangles by their sides.

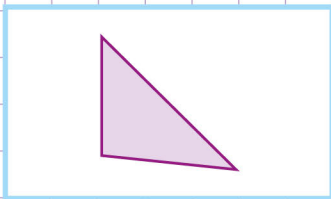


☐ equilateral

☐ isosceles

☐ scalene

2. Classify the following triangles by their sides.

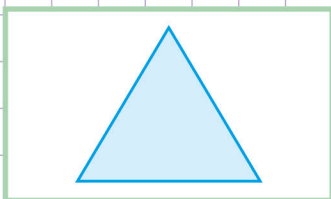


☐ equilateral

☐ isosceles

☐ scalene

3. Classify the following triangles by their sides.

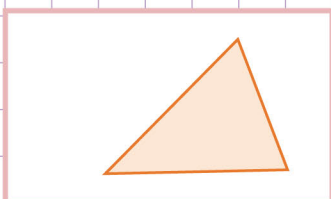


☐ equilateral

☐ isosceles

☐ scalene

4. Classify the following triangles by their sides.



☐ equilateral

☐ scalene

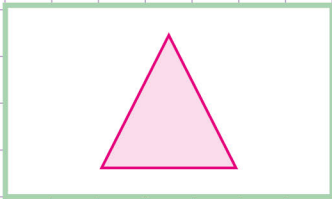
☐ isosceles



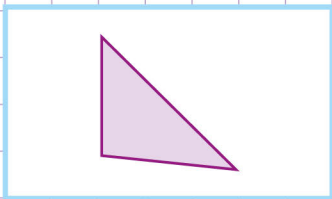
Name: ..... Class: .....

## Classify triangles

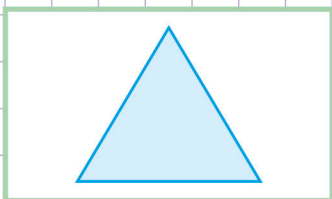
1. Classify the following triangles by their sides.

☐ equilateral☒ isosceles☐ scalene

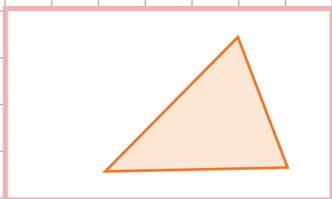
2. Classify the following triangles by their sides.

☐ equilateral☐ isosceles☒ scalene

3. Classify the following triangles by their sides.

☒ equilateral☐ isosceles☐ scalene

4. Classify the following triangles by their sides.

☐ equilateral☒ scalene☐ isosceles