

Name: Class:

Parallel sides in quadrilaterals


How many pairs of opposite sides are parallel in the shapes below? *Choose the correct answer.*



1 pair

2 pair

zero pair



1 pair

2 pair

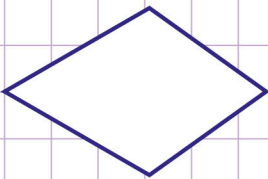
zero pair



1 pair

2 pair

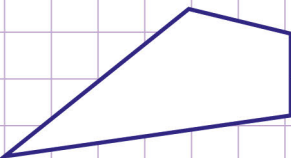
zero pair



1 pair

2 pair

zero pair



1 pair

2 pair

zero pair



1 pair


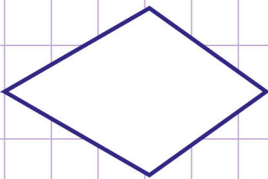
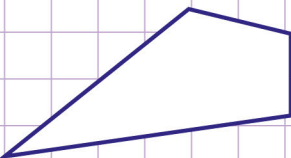
2 pair

zero pair



Name: Class:

Parallel sides in quadrilaterals

How many pairs of opposite sides are parallel in the shapes below? *Choose the correct answer.* 1 pair 2 pair zero pair 1 pair 2 pair zero pair 1 pair 2 pair zero pair 1 pair 2 pair zero pair 1 pair 2 pair zero pair 1 pair 2 pair zero pair