



Name: ..... Class: .....

Identify Trapezoids

*A trapezoid is a four - sided shape with sides that have a pair of parallel opposite sides.*

Say whether the following quadrilaterals are trapezoids. *Justify your answer.*



Name: ..... Class: .....


## Identify Trapezoids

*A trapezoid is a four - sided shape with sides that have a pair of parallel opposite sides.*


Say whether the following quadrilaterals are trapezoids. *Justify your answer.*



Yes, this quadrilateral is a trapezoid because it has a pair of parallel opposite sides.



No, this quadrilateral is not a trapezoid because it has no pair of parallel opposite sides.



Yes, this quadrilateral is a trapezoid because it has a pair of parallel opposite sides.



Yes, this quadrilateral is a trapezoid because it has a pair of parallel opposite sides.



Yes, this quadrilateral is a trapezoid because it has a pair of parallel opposite sides.

