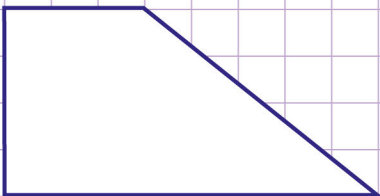
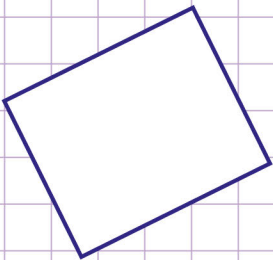
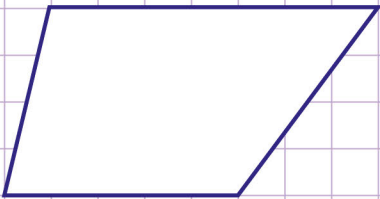


Name: Class:

Identify rectangles

A rectangle is a four - sided flat shape where every angle is a right angle (90°).

Say whether the following quadrilaterals are rectangles. *Justify your answer.*



Name: Class:

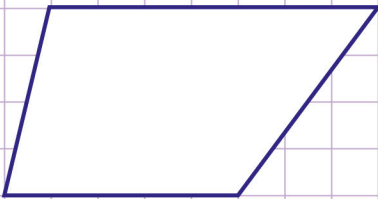
Identify rectangles

A rectangle is a four - sided flat shape where every angle is a right angle (90°).

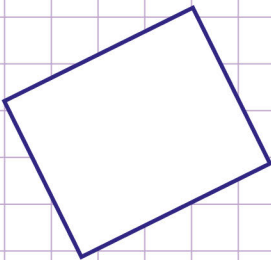
Say whether the following quadrilaterals are rectangles. *Justify your answer.*



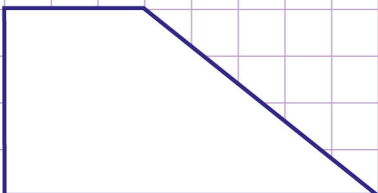
We know that a rectangle has 4 right angles.
Let's check if the quadrilateral given has four right angles.
Yes it has 4 right angles
So, **this is a rectangle.**



We know that a rectangle has 4 right angles
Let's check if the quadrilateral given has four right angles.
The shape above has only one right angle not 4
So, **this is not a rectangle.**



We know that a rectangle has 4 right angles
Let's check if the quadrilateral given has four right angles.
Yes it has 4 right angles.
So, **this is a rectangle**



We know that a rectangle has 4 right angles.
Let's check if the quadrilateral given has four right angles.
The shape above has only two right angle not 4
So, **this is not a rectangle.**



We know that a rectangle has 4 right angles.
Let's check if the quadrilateral given has four right angles.
Yes it has 4 right angles
So, **this is a rectangle.**

