


Name: ..... Class: .....


Draw lines of symmetry

Draw all the lines of symmetry for the following.

1.



The vertical dotted line is a line of symmetry because it divides the object into two equal halves that match exactly


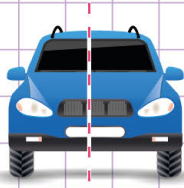


Name: ..... Class: .....

Draw lines of symmetry

Draw all the lines of symmetry for the following.

1.



The vertical dotted line is a line of symmetry because it divides the object into two equal halves that match exactly

