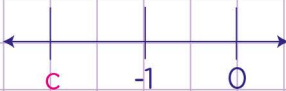


Name: ..... Class: .....

Rational numbers: find the sign

Numbers to the left of zero are negative while numbers to the right of zero are positive.

Find the signs of the unknown numbers shown on the number lines.

1.  Is c positive or negative?

2.  Is x and y positive or negative?

 and 

3.  Is x, y and z positive or negative?

,  and 

4.  Is a positive or negative?

5. 

Is b and c positive or negative?

 and 

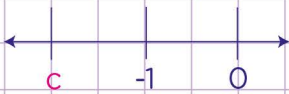

Name: ..... Class: .....

## Rational numbers: find the sign

Numbers to the left of zero are negative while numbers to the right of zero are positive

Find the signs of the unknown numbers shown on the number lines.

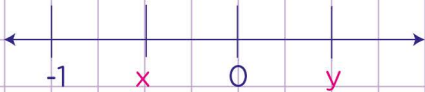
1.



is c positive or negative?

c is negative

2.



is x and y positive or negative?

x is negative

and

y is positive

3.



is x, y and z positive or negative?

x is negative

,

y is positive

and

z is positive

4.



is a positive or negative?

a is positive

5.



is b and c positive or negative?

b is negative

and

c is negative

