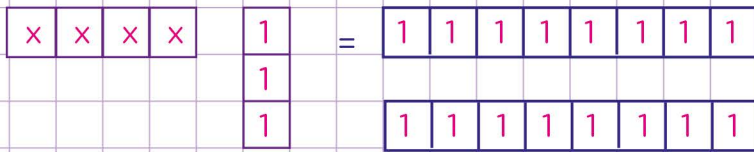


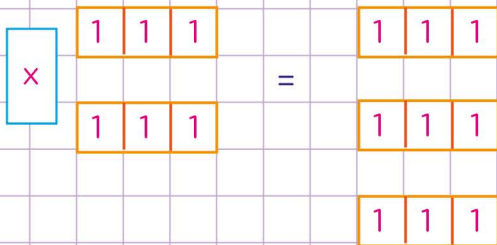
Name: Class:

Model and solve equations using algebra tiles

1. Which equation does this set of algebra tiles represent?



2. Which equation does this set of algebra tiles represent?



- $x + 4 = 7$
 $x + 3 = 9$
 $x + 4 = 8$
 $x + 6 = 9$

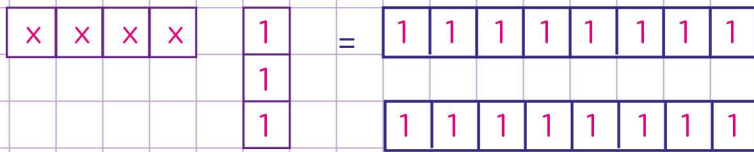
3. Which set of algebra tiles represents the equation $x = 4$

- $x = 2$
 $x = 4$
- $x = 1$
 $x = 4$

Name: Class:

Model and solve equations using algebra tiles

1. Which equation does this set of algebra tiles represent?



Look at the tiles on the left side of the set

the left side has 4 (x) tiles and 3 (1) tiles

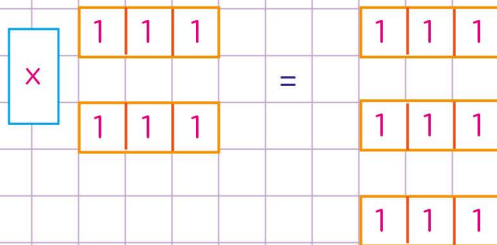
look at the tiles on the right side of the set.

the right side has 16 (1) tiles

So, the right side of the equation should be 16

Therefore, the set of algebra tiles represent $4x + 3 = 16$

2. Which equation does this set of algebra tiles represent?



- $x + 4 = 7$
 $x + 3 = 9$
 $x + 4 = 8$
 $x + 6 = 9$

3. Which set of algebra tiles represents the equation $x = 4$

- $x = 2$
 $x = 3$
- $x = 1$
 $x = 4$