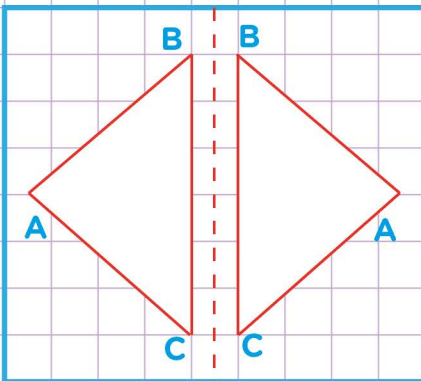


Name: Class:

Reflection, rotation, and translation

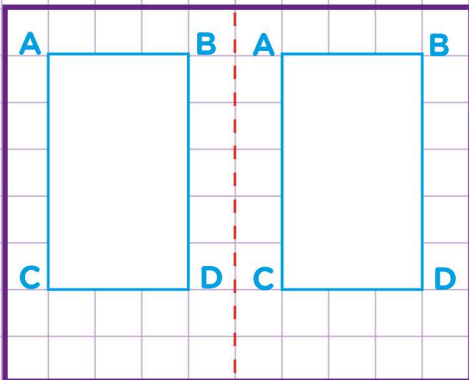


1. Tell how each figure below was transformed. Write translation, rotation or reflection



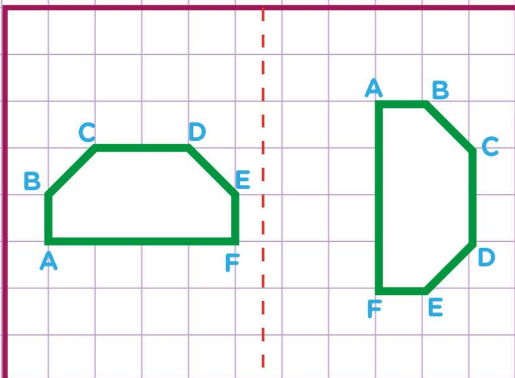
The figure has been transformed by ?

2. The figure has been transformed by ?



The figure has been transformed by ?

3. The figure has been transformed by ?



The figure has been transformed by ?

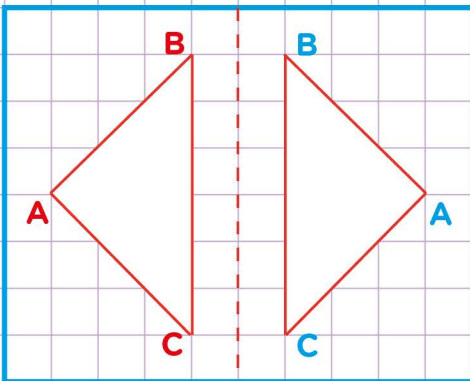


Name: Class:

Reflection, rotation, and translation



1. Tell how each figure below was transformed. Write translation, rotation or reflection



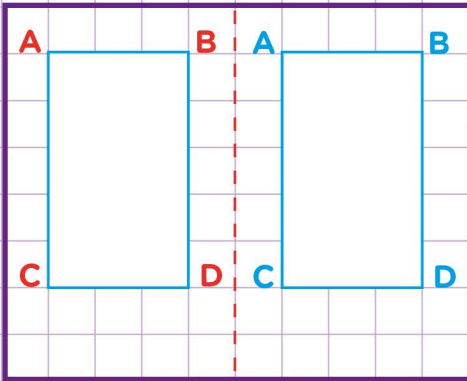
The figure has been transformed by ?

Reflection

A reflection flips the figure over a line to create a mirror image.

So, this is reflection.

2.



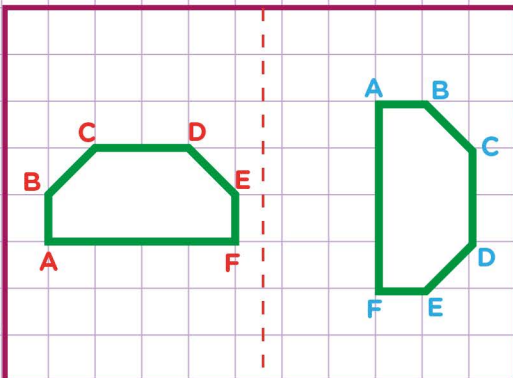
The figure has been transformed by ?

Translation

A translation slides the figure to a different location.

So, this is Translation.

3.



The figure has been transformed by ?

Rotation

A rotation turns the figure around a point.

So, this is Rotation.

