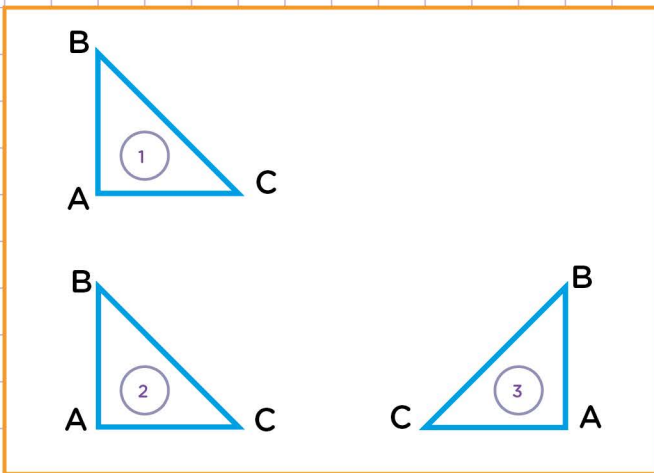


Name: ..... Class: .....

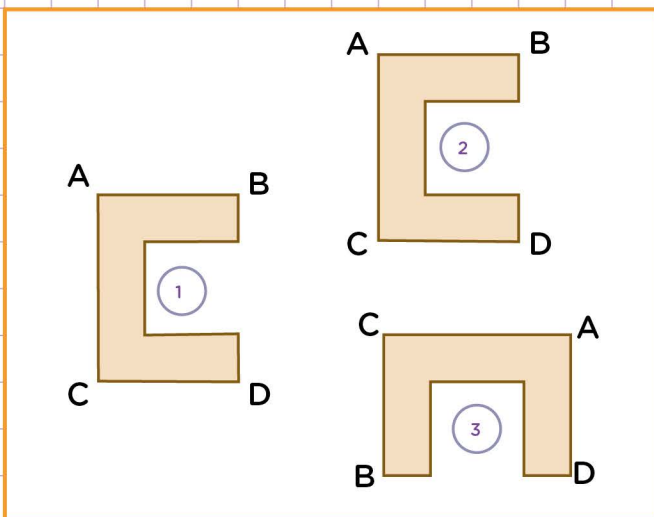
Combinations of reflections, rotations, and translations

1. What combination of transformation is shown below?




- Rotation, then translation
- Translation, then rotation
- Reflection, then translation
- Translation, then reflection

2. What combination of transformation is shown below?



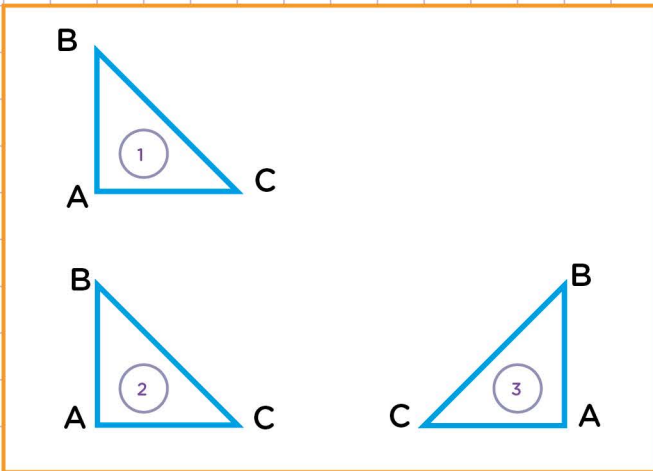
- Translation, then rotation
- Rotation, then Translation
- Translation, then Reflection
- Reflection, then Translation



Name: ..... Class: .....

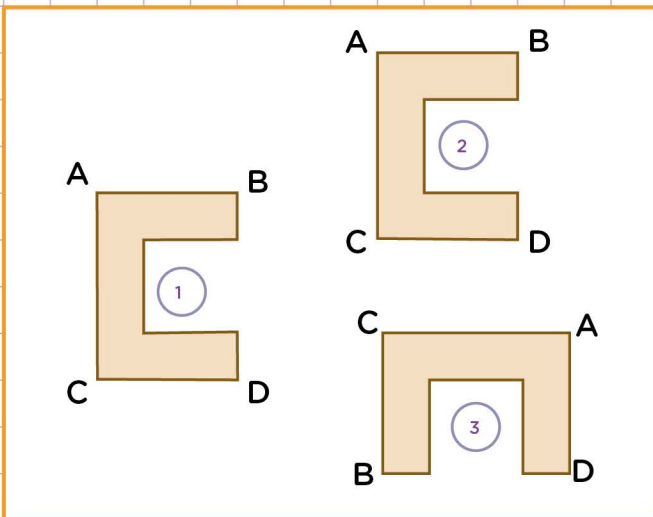
Combinations of reflections, rotations, and translations

1. What combination of transformation is shown below?



- Rotation, then translation
- Translation, then rotation
- Reflection, then translation
- Translation, then reflection

2. What combination of transformation is shown below?



- Translation, then rotation
- Rotation, then Translation
- Translation, then Reflection
- Reflection, then Translation

