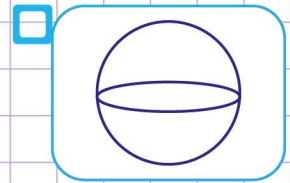
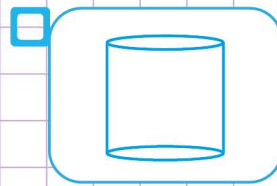
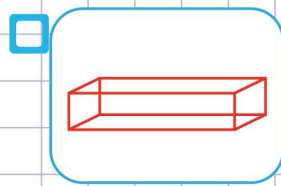
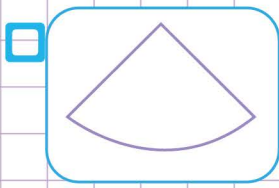


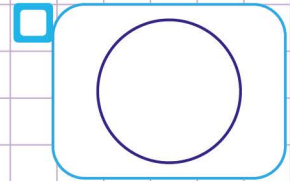
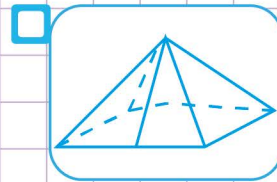
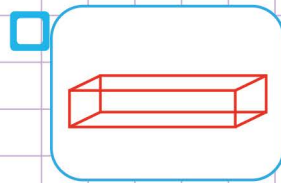
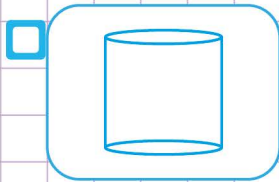
Name: ..... Class: .....

Which figure is being described?

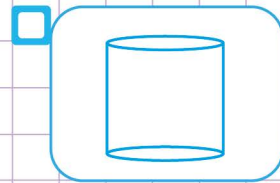

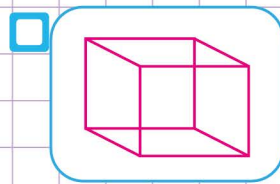
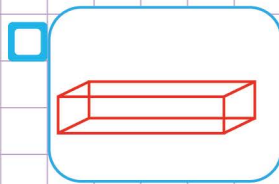
1. Patrick made a 3-dimensional figure out of a cardboard. The figure had six rectangular faces. Which figure could Patrick have made ?



2. Leo made a 3-dimensional figure out of a cardboard. The figure had 2 round faces at the top and at the base. Which figure could Leo have made ?



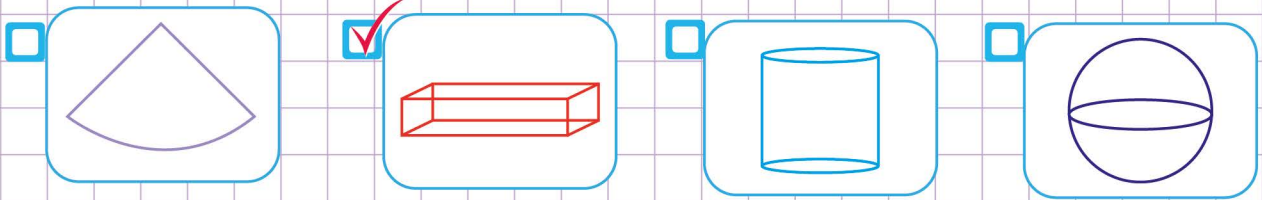
3. Sandra's friend Lilly made a 3-dimensional figure out of a wood. The figure had 6 square faces. Which figure could Lilly have made ?



Name: ..... Class: .....

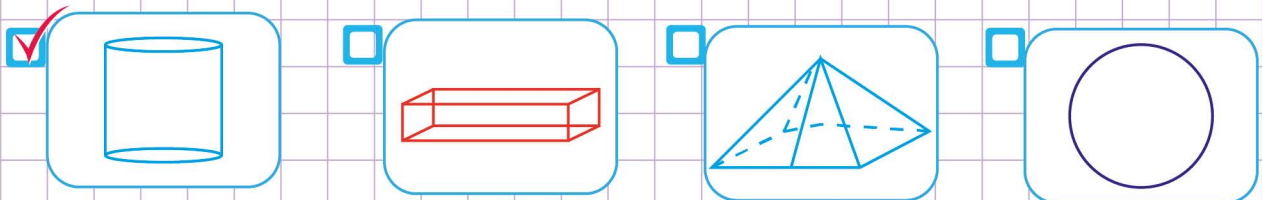
Which figure is being described?

1. Patrick made a 3-dimensional figure out of a cardboard. The figure had six rectangular faces. Which figure could Patrick have made ?



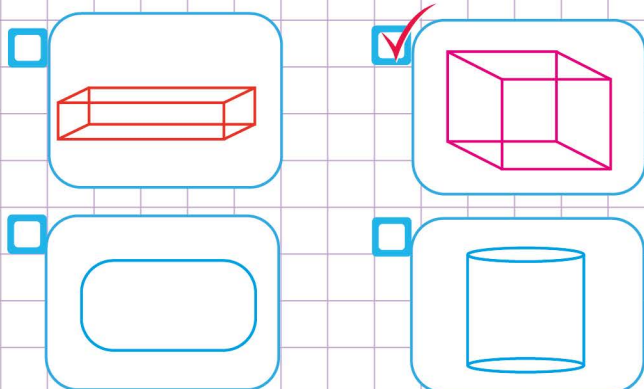
Look for the figure that has 6 rectangular faces from the figures above.

2. Leo made a 3-dimensional figure out of a cardboard. The figure had 2 round faces at the top and at the base. Which figure could Leo have made ?



Look for the figure that has 2 round faces at the top and at the base from the figures above.

3. Sandra's friend Lilly made a 3-dimensional figure out of a wood. The figure had 6 square faces. Which figure could Lilly have made ?



Look for the figure that has 6 square faces from the figures above.

